


Höw many
dö Yöü
see?

Höw many dö yöu see?




1 Rabbit. How many ears?

$$1 \times 2 = 2$$

2 ears

Höw many dö yöu see?



2 Rabbits. How many ears?

$$2 \times 2 = 4$$

4 ears

Höw many dö yöu see?




3 Rabbits. How many ears?

$$3 \times 2 = 6$$

6 ears

Höw many dö yöu see?



4 Rabbits. How many ears?

$$4 \times 2 = 8$$

8 ears

Höw many dö Yöü see?




5 Rabbits. How many ears?

$$5 \times 2 = 10$$

10 ears

Höw many dö Yöü see?




6 Rabbits. How many ears?

$$6 \times 2 = 12$$

12 ears

Höw many dö Yöu see?




7 Rabbits. How many ears?

$$7 \times 2 = 14$$

14 ears

Höw many dö Yöu see?




8 Rabbits. How many ears?

$$8 \times 2 = 16$$

16 ears

Höw many dö Yöü see?




9 Rabbits. How many ears?

$$9 \times 2 = 18$$

18 ears

Höw many dö Yöü see?



10 Rabbits. How many ears?

$$10 \times 2 = 20$$

20 ears

Höw many dö Yöü see?



1 tricycle. How many wheels?

$$1 \times 3 = 3$$

3 wheels

Höw many dö Yöü see?



2 tricycles. How many wheels?

$$2 \times 3 = 6$$

6 wheels

Höw many dö Yöu see?



3 tricycles. How many wheels?

$$3 \times 3 = 9$$

9 wheels

Höw many dö Yöu see?



4 tricycles. How many wheels?

$$4 \times 3 = 12$$

12 wheels

Höw many dö yöü see?




5 tricycles. How many wheels?

$$5 \times 3 = 15$$

15 wheels

Höw many dö yöü see?



6 tricycles. How many wheels?

$$6 \times 3 = 18$$

18 wheels

Höw many dö Yöü see?



7 tricycles. How many wheels?

$$7 \times 3 = 21$$

21 wheels

Höw many dö Yöü see?



8 tricycles. How many wheels?

$$8 \times 3 = 24$$

24 wheels

Höw many dö Yöü see?




9 tricycles. How many wheels?

$$9 \times 3 = 27$$

27 wheels

Höw many dö Yöü see?




10 tricycles. How many wheels?

$$10 \times 3 = 30$$

30 wheels

Höw many dö Yöü see?



1 dog. How many legs?

$$1 \times 4 = 4$$

4 legs

Höw many dö Yöü see?




2 dogs. How many legs?

$$2 \times 4 = 8$$

8 legs

Höw many dö Yöü see?




3 dogs. How many legs?

$$3 \times 4 = 12$$

12 legs

Höw many dö Yöü see?




4 dogs. How many legs?

$$4 \times 4 = 16$$

16 legs

Höw many dö Yöü see?




5 dogs. How many legs?

$$5 \times 4 = 20$$

20 legs

Höw many dö Yöü see?




6 dogs. How many legs?

$$6 \times 4 = 24$$

24 legs

Höw many dö Yöü see?




7 dogs. How many legs?

$$7 \times 4 = 28$$

28 legs

Höw many dö Yöü see?




8 dogs. How many legs?

$$8 \times 4 = 32$$

32 legs

Höw many dö Yöü see?




9 dogs. How many legs?

$$9 \times 4 = 36$$

20 legs

Höw many dö Yöü see?



10 dogs. How many legs?

$$10 \times 4 = 40$$

24 legs

Höw many dö Yöu see?




1 hand. How many fingers?

$$1 \times 5 = 5$$

5 fingers

Höw many dö Yöu see?




2 hands. How many fingers?

$$2 \times 5 = 10$$

10 fingers

Höw many dö yöü see?




3 hands. How many fingers?

$$3 \times 5 = 15$$

15 fingers

Höw many dö yöü see?




4 hands. How many fingers?

$$4 \times 5 = 20$$

20 fingers

Höw many dö Yöü see?




5 hands. How many fingers?

$$5 \times 5 = 25$$

25 fingers

Höw many dö Yöü see?




6 hands. How many fingers?

$$6 \times 5 = 30$$

30 fingers

Höw many dö Yöü see?




7 hands. How many fingers?

$$7 \times 5 = 35$$

35 fingers

Höw many dö Yöü see?




8 hands. How many fingers?

$$8 \times 5 = 40$$

40 fingers

Höw many dö Yöü see?




9 hands. How many fingers?

$$9 \times 5 = 45$$

45 fingers

Höw many dö Yöü see?




10 hands. How many fingers?

$$10 \times 5 = 50$$

50 fingers

Höw many dö Yöü see?




1 pack of soda. How many cans?

$$1 \times 6 = 6$$

6 cans

Höw many dö Yöü see?




2 packs of soda. How many cans?

$$2 \times 6 = 12$$

12 cans

Höw many dö Yöü see?




3 packs of soda. How many cans?

$$3 \times 6 = 18$$

18 cans

Höw many dö Yöü see?



4 packs of soda. How many cans?

$$4 \times 6 = 24$$

24 cans

Höw many dö Yöü see?

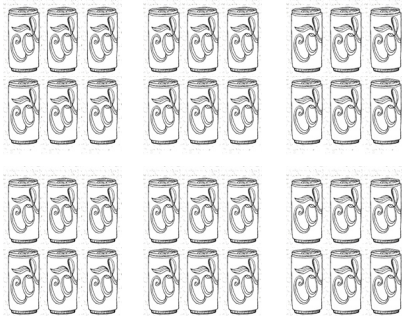


5 packs of soda. How many cans?

$$5 \times 6 = 30$$

30 cans

Höw many dö Yöü see?

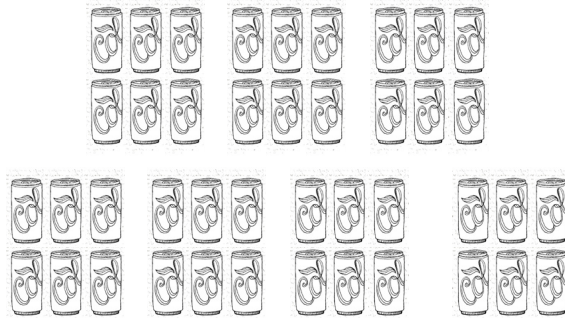


6 packs of soda. How many cans?

$$6 \times 6 = 36$$

36 cans

Höw many dö Yöü see?

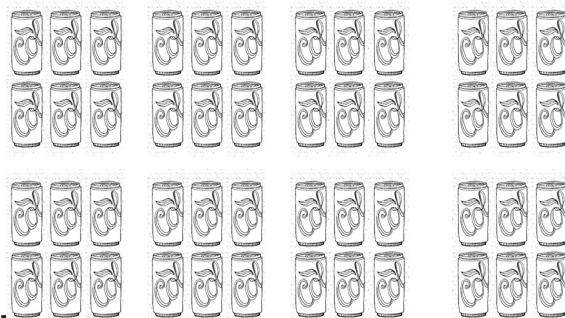


7 packs of soda. How many cans?

$$7 \times 6 = 42$$

42 cans

Höw many dö Yöü see?



8 packs of soda. How many cans?

$$8 \times 6 = 48$$

48 cans

Höw many dö Yöü see?

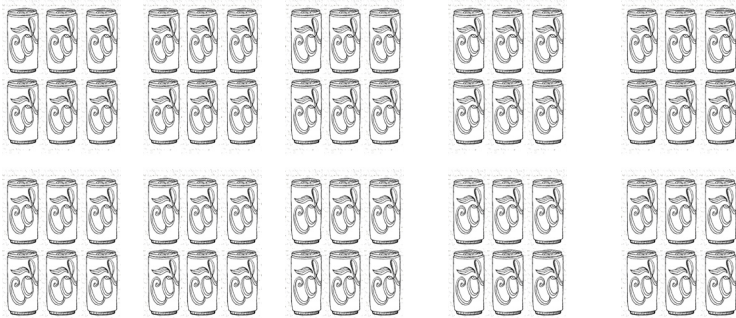


9 packs of soda. How many cans?

$$9 \times 6 = 54$$

54 cans

Höw many dö Yöü see?




10 packs of soda. How many cans?

$$10 \times 6 = 60$$

60 cans

Höw many dö Yöü see?




1 domino. How many dots?

$$1 \times 7 = 7$$

7 dots

Höw many dö Yöü see?




2 dominos. How many dots?

$$2 \times 7 = 14$$

14 dots

Höw many dö Yöü see?




3 dominos. How many dots?

$$3 \times 7 = 21$$

21 dots

Höw many dö Yöü see?

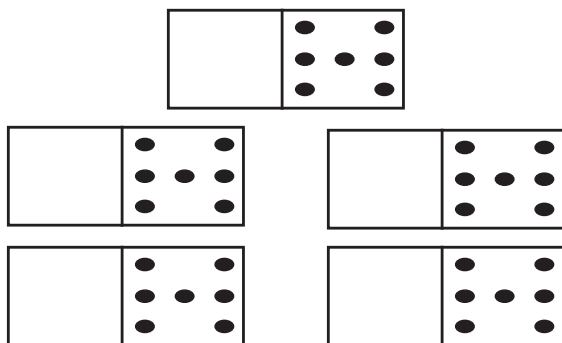


4 dominos. How many dots?

$$4 \times 7 = 28$$

28 dots

Höw many dö yöü see?

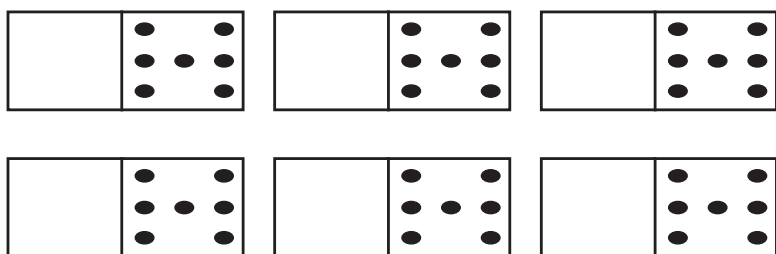


5 dominos. How many dots?

$$5 \times 7 = 35$$

35 dots

Höw many dö yöü see?

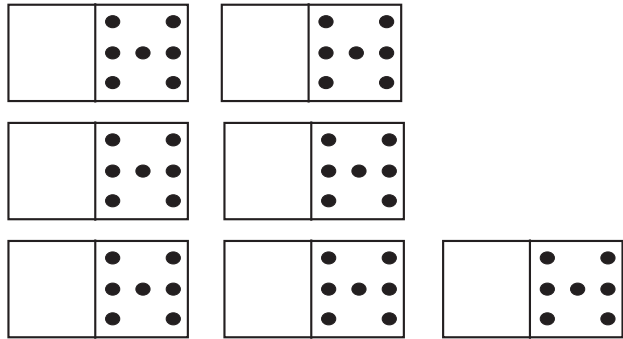


6 dominos. How many dots?

$$6 \times 7 = 42$$

42 dots

Höw many dö Yöü see?

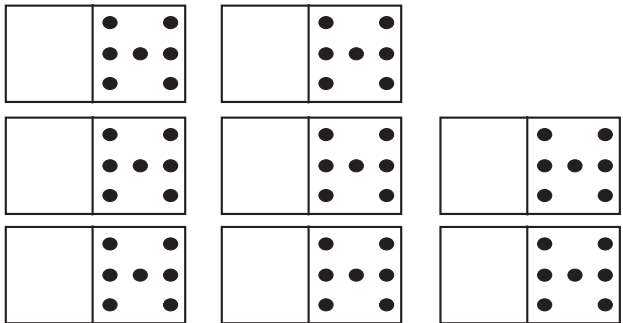


7 dominos. How many dots?

$$7 \times 7 = 49$$

49 dots

Höw many dö Yöü see?




8 dominos. How many dots?

$$8 \times 7 = 56$$

56 dots

Höw many dö Yöü see?




9 dominos. How many dots?

$$9 \times 7 = 63$$

63 dots

Höw many dö Yöü see?




10 dominos. How many dots?

$$10 \times 7 = 70$$

70 dots

Höw many dö Yöü see?



1 octopus. How many legs?

$$1 \times 8 = 8$$

8 legs

Höw many dö Yöü see?




2 octopi. How many legs?

$$2 \times 8 = 16$$

16 legs

Höw many dö Yöü see?




3 octopi. How many legs?

$$3 \times 8 = 24$$

24 legs

Höw many dö Yöü see?




4 octopi. How many legs?

$$4 \times 8 = 32$$

32 legs

Höw many dö Yöü see?




5 octopi. How many legs?

$$5 \times 8 = 40$$

40 legs

Höw many dö Yöü see?




6 octopi. How many legs?

$$6 \times 8 = 48$$

48 legs

Höw many dö Yöü see?




7 octopi. How many legs?

$$7 \times 8 = 56$$

56 legs

Höw many dö Yöü see?




8 octopi. How many legs?

$$8 \times 8 = 64$$

64 legs

Höw many dö Yöü see?




9 octopi. How many legs?

$$9 \times 8 = 72$$

72 legs

Höw many dö Yöü see?




10 octopi. How many legs?

$$10 \times 8 = 80$$

80 legs

Höw many dö yöü see?




1 die. How many dots?

$$1 \times 9 = 9$$

9 dots

Höw many dö yöü see?




2 dice. How many dots?

$$2 \times 9 = 18$$

18 dots

Höw many dö Yöü see?




3 dice. How many dots?

$$3 \times 9 = 27$$

27 dots

Höw many dö Yöü see?




4 dice. How many dots?

$$4 \times 9 = 36$$

36 dots

Höw many dö Yöü see?




5 dice. How many dots?

$$5 \times 9 = 45$$

45 dots

Höw many dö Yöü see?




6 dice. How many dots?

$$6 \times 9 = 54$$

54 dots

Höw many dö Yöü see?




7 dice. How many dots?

$$7 \times 9 = 63$$

63 dots

Höw many dö Yöü see?




8 dice. How many dots?

$$8 \times 9 = 72$$

72 dots

Höw many dö Yöü see?




9 dice. How many dots?

$$9 \times 9 = 81$$

81 dots

Höw many dö Yöü see?



10 dice. How many dots?

$$10 \times 9 = 90$$

90 dots

Höw many dö yöü see?



1 rod. How many cubes?

$$1 \times 10 = 10$$

10 cubes

Höw many dö yöü see?

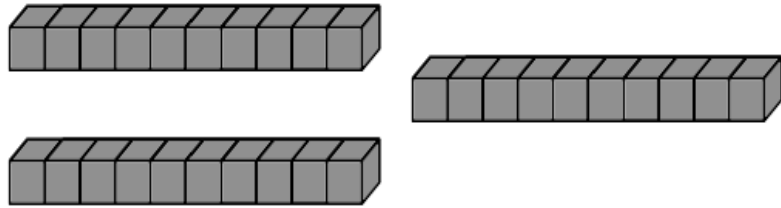


2 rods. How many cubes?

$$2 \times 10 = 20$$

20 cubes

Höw many dö Yöu see?

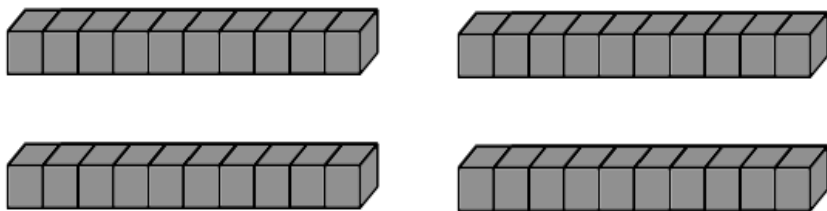


3 rods. How many cubes?

$$3 \times 10 = 30$$

30 cubes

Höw many dö Yöu see?

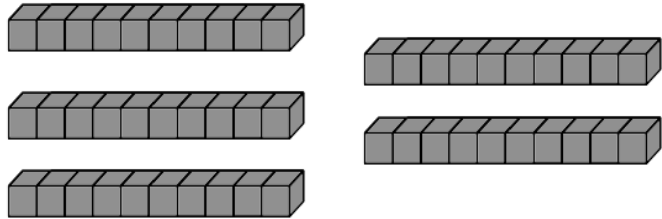


4 rods. How many cubes?

$$4 \times 10 = 40$$

40 cubes

Höw many dö Yöü see?

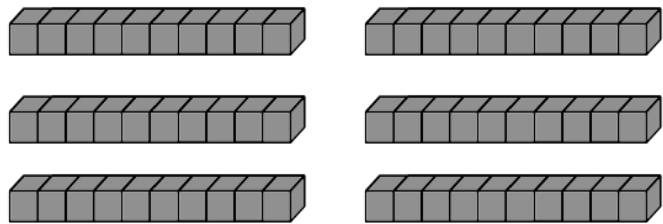


5 rods. How many cubes?

$$5 \times 10 = 50$$

50 cubes

Höw many dö Yöü see?

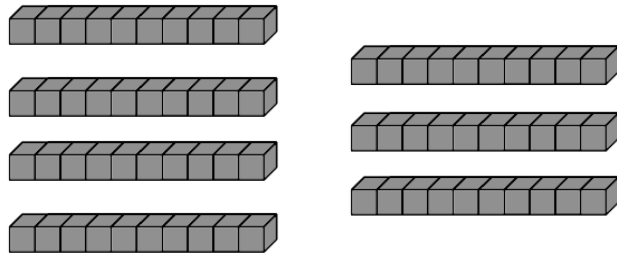


6 rods. How many cubes?

$$6 \times 10 = 60$$

60 cubes

Höw many dö Yöü see?

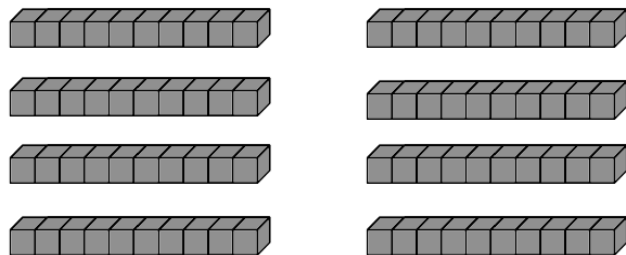


7 rods. How many cubes?

$$7 \times 10 = 70$$

70 cubes

Höw many dö Yöü see?

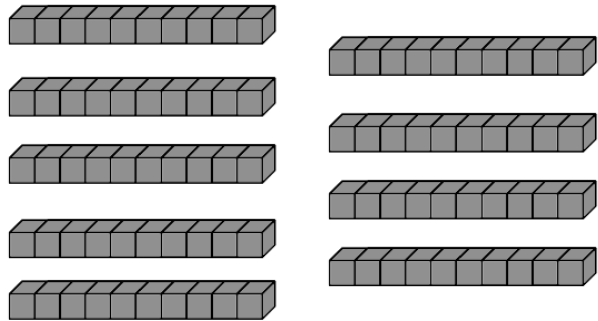


8 rods. How many cubes?

$$8 \times 10 = 80$$

80 cubes

Höw many dö Yöü see?

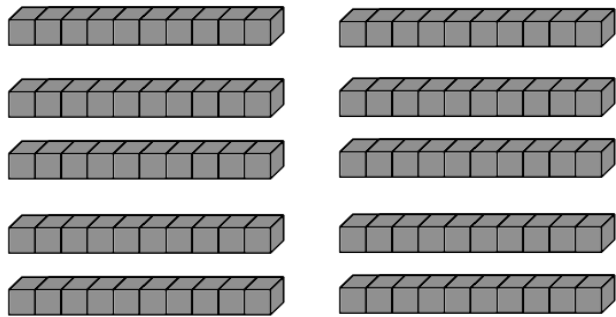


9 rods. How many cubes?

$$9 \times 10 = 90$$

90 cubes

Höw many dö Yöü see?



10 rods. How many cubes?

$$10 \times 10 = 100$$

100 cubes