


What's Missing?


$$- 3 = 8$$

drnickinewton.com




drnickinewton.com

What's Missing?


$$- 4 = 8$$

drnickinewton.com



drnickinewton.com

What's Missing?


$$- 5 = 8$$

drnickinewton.com



drnickinewton.com

What's Missing?


$$- 6 = 9$$

drnickinewton.com




drnickinewton.com

What's Missing?



$$- 6 = 5$$

drnickinewton.com




drnickinewton.com

What's Missing?


$$- 8 = 3$$

drnickinewton.com




drnickinewton.com

What's Missing?


$$- 9 = 2$$

drnickinewton.com



drnickinewton.com

What's Missing?


$$- 5 = 7$$

drnickinewton.com



drnickinewton.com

What's Missing?


$$- 6 = 6$$

drnickinewton.com



drnickinewton.com

What's Missing?


$$- 8 = 4$$

drnickinewton.com



drnickinewton.com

What's Missing?


$$- 9 = 3$$

drnickinewton.com



drnickinewton.com

What's Missing?


$$- 6 = 7$$

drnickinewton.com



drnickinewton.com

What's Missing?


$$- 8 = 5$$

drnickinewton.com



drnickinewton.com

What's Missing?


$$- 9 = 4$$

drnickinewton.com



drnickinewton.com

What's Missing?

$$\text{pumpkin} - 6 = 8$$

drnickinewton.com



drnickinewton.com

What's Missing?

$$\text{pumpkin} - 8 = 6$$

drnickinewton.com



drnickinewton.com

What's Missing?


$$- 9 = 4$$

drnickinewton.com



drnickinewton.com

What's Missing?


$$- 7 = 8$$

drnickinewton.com



drnickinewton.com

What's Missing?


$$- 8 = 7$$

drnickinewton.com



drnickinewton.com

What's Missing?


$$- 9 = 6$$

drnickinewton.com



drnickinewton.com

What's Missing?

$$\text{pumpkin} - 7 = 9$$

drnickinewton.com



drnickinewton.com

What's Missing?

$$\text{pumpkin} - 8 = 8$$

drnickinewton.com



drnickinewton.com

What's Missing?


$$- 9 = 7$$

drnickinewton.com



drnickinewton.com

What's Missing?


$$- 8 = 9$$

drnickinewton.com



drnickinewton.com

What's Missing?


$$- 9 = 8$$

drnickinewton.com



drnickinewton.com