



# HUNDRED GRID PUZZLES

Finding more and less

<b>34</b>	

<b>27</b>	

<b>56</b>	

<b>14</b>	

<b>45</b>	

<b>53</b>	

<b>77</b>	

<b>87</b>	

<b>43</b>	

<b>15</b>	

<b>66</b>	

<b>48</b>	

# HUNDRED GRID PUZZLES

Finding more and less

**32**

**16**

**54**

**76**

**23**

**13**

**22**

**58**

**48**

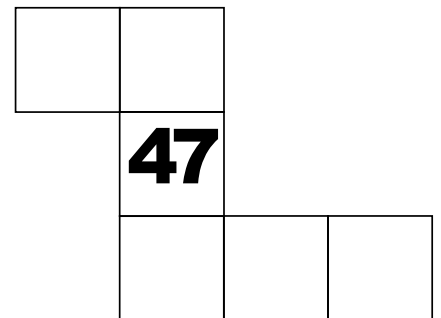
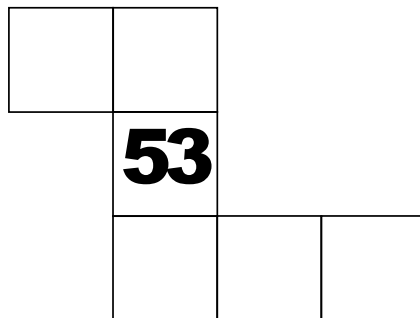




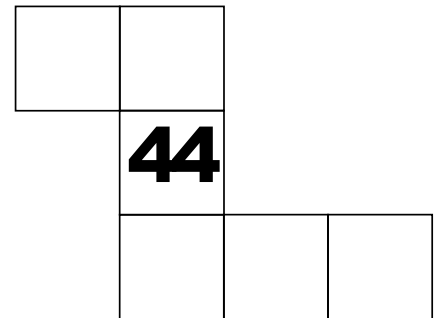

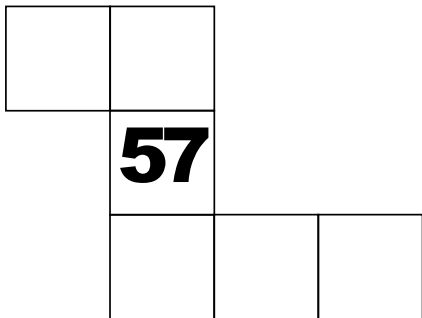

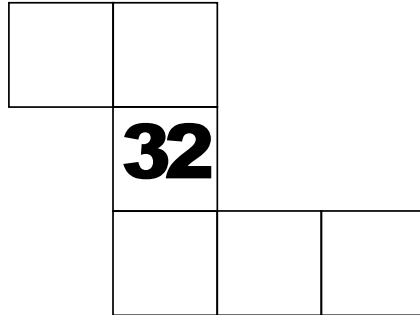
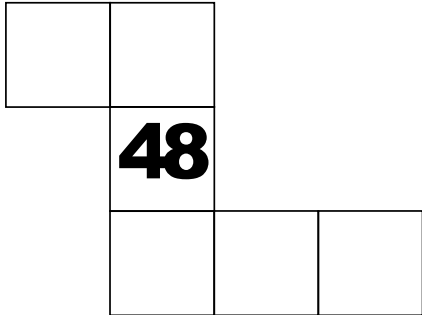
**38**

**43**

**56**

# HUNDRED GRID PUZZLES

Finding more and less





# Finding more and less flashcard

**FILL IN THE CHART**

	<b>12</b>	

**FILL IN THE CHART**

<b>1</b>	<b>2</b>	
	<b>12</b>	
<b>22</b>	<b>23</b>	<b>24</b>

**FILL IN THE CHART**

	<b>48</b>	

**FILL IN THE CHART**

<b>37</b>	<b>38</b>	
	<b>48</b>	
<b>58</b>	<b>59</b>	<b>60</b>

**FILL IN THE CHART**

	<b>82</b>	

**FILL IN THE CHART**

<b>71</b>	<b>72</b>	
	<b>82</b>	
<b>92</b>	<b>93</b>	<b>94</b>

# Finding more and less flashcard

**FILL IN THE CHART**

33	

**FILL IN THE CHART**

22	23
33	
43	44 45

**FILL IN THE CHART**

54	

**FILL IN THE CHART**

43	44
54	
64	65 66

**FILL IN THE CHART**

67	

**FILL IN THE CHART**

56	57
67	
77	78 79

# Finding more and less flashcard

**FILL IN THE CHART**

<b>78</b>		

**FILL IN THE CHART**

<b>67</b>	<b>68</b>	
<b>78</b>		
<b>88</b>	<b>89</b>	<b>90</b>

**FILL IN THE CHART**

<b>43</b>		

**FILL IN THE CHART**

<b>32</b>	<b>33</b>	
<b>43</b>		
<b>53</b>	<b>54</b>	<b>55</b>

**FILL IN THE CHART**

<b>26</b>		

**FILL IN THE CHART**

<b>15</b>	<b>16</b>	
<b>26</b>		
<b>36</b>	<b>37</b>	<b>38</b>



# Finding more and less flashcard

**FILL IN THE CHART**

	<b>16</b>		

**FILL IN THE CHART**

<b>5</b>	<b>6</b>		
	<b>16</b>		
	<b>26</b>	<b>27</b>	<b>28</b>

**FILL IN THE CHART**

	<b>36</b>		

**FILL IN THE CHART**

<b>25</b>	<b>26</b>		
	<b>36</b>		
	<b>46</b>	<b>47</b>	<b>48</b>

**FILL IN THE CHART**

	<b>57</b>		

**FILL IN THE CHART**

<b>46</b>	<b>47</b>		
	<b>57</b>		
	<b>67</b>	<b>68</b>	<b>69</b>

# Finding more and less flashcard

**FILL IN THE CHART**



**34**



**FILL IN THE CHART**



**23 24**

**34**


**44 45 46**



**FILL IN THE CHART**



**27**



**FILL IN THE CHART**



**16 17**

**27**


**37 38 39**



**FILL IN THE CHART**



**56**



**FILL IN THE CHART**



**45 46**

**56**

**66 67 68**



# Finding more and less flashcard

**FILL IN THE CHART**

	14	

**FILL IN THE CHART**

	3	4	
		14	
	24	25	26

**FILL IN THE CHART**

	45	

**FILL IN THE CHART**

	34	35	
		45	
	55	56	57

**FILL IN THE CHART**

	53	

**FILL IN THE CHART**

	42	43	
		53	
	63	64	65

# Finding more and less flashcard

**FILL IN THE CHART**

	77		

**FILL IN THE CHART**

	66	67	
	77		
	87	88	89

**FILL IN THE CHART**

	87		

**FILL IN THE CHART**

	76	77	
	87		
	97	98	99

**FILL IN THE CHART**

	43		

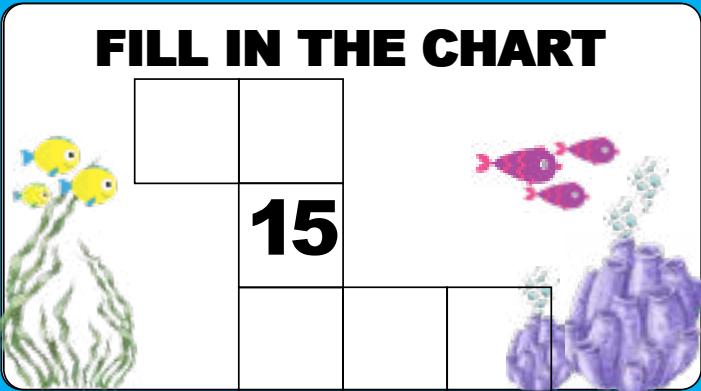
**FILL IN THE CHART**

	32	33	
	43		
	53	54	55

# Finding more and less flashcard


**FILL IN THE CHART**

	<b>15</b>		




**FILL IN THE CHART**

<b>4</b>	<b>5</b>		
	<b>15</b>		
<b>25</b>	<b>26</b>	<b>27</b>	




**FILL IN THE CHART**

	<b>66</b>		




**FILL IN THE CHART**

<b>55</b>	<b>56</b>		
	<b>66</b>		
<b>76</b>	<b>77</b>	<b>78</b>	




**FILL IN THE CHART**

	<b>48</b>		



**FILL IN THE CHART**

<b>37</b>	<b>38</b>		
	<b>48</b>		
<b>58</b>	<b>59</b>	<b>60</b>	



# Finding more and less flashcard

**FILL IN THE CHART**

	32		

**FILL IN THE CHART**

21	22		
	32		
42	43	44	

**FILL IN THE CHART**

	16		

**FILL IN THE CHART**

5	6		
	16		
26	27	28	

**FILL IN THE CHART**

	54		

**FILL IN THE CHART**

43	44		
	54		
64	65	66	

# Finding more and less flashcard

**FILL IN THE CHART**

	<b>76</b>		

**FILL IN THE CHART**

<b>65</b>	<b>66</b>		
	<b>76</b>		
<b>86</b>	<b>87</b>	<b>88</b>	

**FILL IN THE CHART**

	<b>23</b>		

**FILL IN THE CHART**

<b>12</b>	<b>13</b>		
	<b>23</b>		
<b>33</b>	<b>34</b>	<b>35</b>	

**FILL IN THE CHART**

	<b>13</b>		

**FILL IN THE CHART**

<b>2</b>	<b>3</b>		
	<b>13</b>		
<b>23</b>	<b>24</b>	<b>25</b>	

# Finding more and less flashcard

**FILL IN THE CHART**

	22		

**FILL IN THE CHART**

	11	12	
	22		
	32	33	34

**FILL IN THE CHART**

	58		

**FILL IN THE CHART**

	47	48	
	58		
	68	69	70

**FILL IN THE CHART**

	48		

**FILL IN THE CHART**

	37	38	
	48		
	58	59	60



# Finding more and less flashcard

**FILL IN THE CHART**

	<b>38</b>		

This flashcard features a grid with the number 38 in the center. To the left of the grid are five red stars, and to the right are two sea turtles. The grid has four columns and three rows.

**FILL IN THE CHART**

<b>27</b>	<b>28</b>		
	<b>38</b>		
	<b>48</b>	<b>49</b>	<b>50</b>

This flashcard features a grid with the number 38 in the center. To the left of the grid are five red stars, and to the right are two sea turtles. The grid has four columns and three rows.

**FILL IN THE CHART**

	<b>43</b>		

This flashcard features a grid with the number 43 in the center. To the left of the grid are two cacti, and to the right are two lions. The grid has four columns and three rows.

**FILL IN THE CHART**

<b>32</b>	<b>33</b>		
	<b>43</b>		
	<b>53</b>	<b>54</b>	<b>55</b>

This flashcard features a grid with the number 43 in the center. To the left of the grid are two cacti, and to the right are two lions. The grid has four columns and three rows.

**FILL IN THE CHART**

	<b>56</b>		

This flashcard features a grid with the number 56 in the center. To the left of the grid are four small blue fish, and to the right is a large whale. The grid has four columns and three rows.

**FILL IN THE CHART**

<b>45</b>	<b>46</b>		
	<b>56</b>		
	<b>66</b>	<b>67</b>	<b>68</b>

This flashcard features a grid with the number 56 in the center. To the left of the grid are four small blue fish, and to the right is a large whale. The grid has four columns and three rows.

# Finding more and less flashcard

**FILL IN THE CHART**

	<b>48</b>	

**FILL IN THE CHART**

	<b>37</b>	<b>38</b>	
	<b>48</b>		
	<b>58</b>	<b>59</b>	<b>60</b>

**FILL IN THE CHART**

	<b>32</b>	

**FILL IN THE CHART**

	<b>21</b>	<b>22</b>	
	<b>32</b>		
	<b>42</b>	<b>43</b>	<b>44</b>

**FILL IN THE CHART**

	<b>13</b>	

**FILL IN THE CHART**

	<b>2</b>	<b>3</b>	
	<b>13</b>		
	<b>23</b>	<b>24</b>	<b>25</b>

# Finding more and less flashcard

**FILL IN THE CHART**

	57	

**FILL IN THE CHART**

	46	47	
	57		
	67	68	69

**FILL IN THE CHART**

	34	

**FILL IN THE CHART**

	23	24	
	34		
	44	45	46

**FILL IN THE CHART**

	44	

**FILL IN THE CHART**

	33	34	
	44		
	54	55	56

# Finding more and less flashcard

**FILL IN THE CHART**

	<b>12</b>	

**FILL IN THE CHART**

	<b>1</b>	<b>2</b>	
		<b>12</b>	
	<b>22</b>	<b>23</b>	<b>24</b>

**FILL IN THE CHART**

	<b>17</b>	

**FILL IN THE CHART**

	<b>6</b>	<b>7</b>	
		<b>17</b>	
	<b>27</b>	<b>28</b>	<b>29</b>

**FILL IN THE CHART**

	<b>23</b>	

**FILL IN THE CHART**

	<b>12</b>	<b>13</b>	
		<b>23</b>	
	<b>33</b>	<b>34</b>	<b>35</b>

# Finding more and less flashcard

**FILL IN THE CHART**

	27		

**FILL IN THE CHART**

16	17	27	
		37	38
			39

**FILL IN THE CHART**

	53		

**FILL IN THE CHART**

42	43	53	
		63	64
			65

**FILL IN THE CHART**

	47		

**FILL IN THE CHART**

36	37	47	
		57	58
			59

# Finding more and less flashcard

**FILL IN THE CHART**

	48	

**FILL IN THE CHART**

37	38	
	48	
58	59	60

**FILL IN THE CHART**

	28	

**FILL IN THE CHART**

17	18	
	28	
38	39	40

**FILL IN THE CHART**

	38	

**FILL IN THE CHART**

27	28	
	38	
48	49	50

# Finding more and less flashcard

**FILL IN THE CHART**

	<b>18</b>		

**FILL IN THE CHART**

<b>7</b>	<b>8</b>		
	<b>18</b>		
<b>28</b>	<b>29</b>	<b>30</b>	

**FILL IN THE CHART**

	<b>33</b>		

**FILL IN THE CHART**

<b>22</b>	<b>23</b>		
	<b>33</b>		
<b>43</b>	<b>44</b>	<b>45</b>	

**FILL IN THE CHART**

	<b>44</b>		

**FILL IN THE CHART**

<b>33</b>	<b>34</b>		
	<b>44</b>		
<b>54</b>	<b>55</b>	<b>56</b>	

# Finding more and less flashcard

**FILL IN THE CHART**

	13	

**FILL IN THE CHART**

2	3	
	13	
23	24	25

**FILL IN THE CHART**

	47	

**FILL IN THE CHART**

36	37	
	47	
57	58	59

**FILL IN THE CHART**

	35	

**FILL IN THE CHART**

24	25	
	35	
45	46	47



# Finding more and less flashcard

**FILL IN THE CHART**

	<b>15</b>		

**FILL IN THE CHART**

	<b>4</b>	<b>5</b>	
	<b>15</b>		
	<b>25</b>	<b>26</b>	<b>27</b>

**FILL IN THE CHART**

	<b>55</b>		

**FILL IN THE CHART**

	<b>44</b>	<b>45</b>	
	<b>55</b>		
	<b>65</b>	<b>66</b>	<b>67</b>

**FILL IN THE CHART**

	<b>52</b>		

**FILL IN THE CHART**

	<b>41</b>	<b>42</b>	
	<b>52</b>		
	<b>62</b>	<b>63</b>	<b>64</b>