

# HUNDRED GRID PUZZLES

Finding more and less

<table border="1"><tbody><tr><td></td><td></td><td></td></tr><tr><td></td><td><b>16</b></td><td></td></tr><tr><td></td><td></td><td></td></tr></tbody></table>					<b>16</b>					<table border="1"><tbody><tr><td></td><td></td><td></td></tr><tr><td></td><td><b>27</b></td><td></td></tr><tr><td></td><td></td><td></td></tr></tbody></table>					<b>27</b>					<table border="1"><tbody><tr><td></td><td></td><td></td></tr><tr><td></td><td><b>67</b></td><td></td></tr><tr><td></td><td></td><td></td></tr></tbody></table>					<b>67</b>				
	<b>16</b>																												
	<b>27</b>																												
	<b>67</b>																												
<table border="1"><tbody><tr><td></td><td><b>54</b></td><td></td></tr><tr><td></td><td></td><td></td></tr><tr><td></td><td></td><td></td></tr></tbody></table>		<b>54</b>								<table border="1"><tbody><tr><td></td><td><b>78</b></td><td></td></tr><tr><td></td><td></td><td></td></tr><tr><td></td><td></td><td></td></tr></tbody></table>		<b>78</b>								<table border="1"><tbody><tr><td></td><td><b>36</b></td><td></td></tr><tr><td></td><td></td><td></td></tr><tr><td></td><td></td><td></td></tr></tbody></table>		<b>36</b>							
	<b>54</b>																												
	<b>78</b>																												
	<b>36</b>																												
<table border="1"><tbody><tr><td></td><td></td><td></td></tr><tr><td></td><td></td><td></td></tr><tr><td></td><td><b>28</b></td><td></td></tr></tbody></table>								<b>28</b>		<table border="1"><tbody><tr><td></td><td></td><td></td></tr><tr><td></td><td></td><td></td></tr><tr><td></td><td><b>66</b></td><td></td></tr></tbody></table>								<b>66</b>		<table border="1"><tbody><tr><td></td><td></td><td></td></tr><tr><td></td><td></td><td></td></tr><tr><td></td><td><b>93</b></td><td></td></tr></tbody></table>								<b>93</b>	
	<b>28</b>																												
	<b>66</b>																												
	<b>93</b>																												
<table border="1"><tbody><tr><td><b>43</b></td><td></td><td></td></tr><tr><td></td><td></td><td></td></tr><tr><td></td><td></td><td></td></tr></tbody></table>	<b>43</b>									<table border="1"><tbody><tr><td><b>25</b></td><td></td><td></td></tr><tr><td></td><td></td><td></td></tr><tr><td></td><td></td><td></td></tr></tbody></table>	<b>25</b>									<table border="1"><tbody><tr><td><b>74</b></td><td></td><td></td></tr><tr><td></td><td></td><td></td></tr><tr><td></td><td></td><td></td></tr></tbody></table>	<b>74</b>								
<b>43</b>																													
<b>25</b>																													
<b>74</b>																													

# HUNDRED GRID PUZZLES

Finding more and less

<b>15</b>		

<b>23</b>		

<b>12</b>		

	<b>55</b>	

	<b>79</b>	

	<b>36</b>	

<b>28</b>		

<b>34</b>		

<b>76</b>		

<b>21</b>		

<b>61</b>		

<b>1</b>		

# HUNDRED GRID PUZZLES

Finding more and less

<table border="1"><tbody><tr><td></td><td></td><td></td></tr><tr><td></td><td><b>29</b></td><td></td></tr><tr><td></td><td></td><td></td></tr></tbody></table>					<b>29</b>					<table border="1"><tbody><tr><td></td><td></td><td></td></tr><tr><td></td><td><b>39</b></td><td></td></tr><tr><td></td><td></td><td></td></tr></tbody></table>					<b>39</b>					<table border="1"><tbody><tr><td></td><td></td><td></td></tr><tr><td></td><td><b>59</b></td><td></td></tr><tr><td></td><td></td><td></td></tr></tbody></table>					<b>59</b>				
	<b>29</b>																												
	<b>39</b>																												
	<b>59</b>																												
<table border="1"><tbody><tr><td></td><td><b>12</b></td><td></td></tr><tr><td></td><td></td><td></td></tr><tr><td></td><td></td><td></td></tr></tbody></table>		<b>12</b>								<table border="1"><tbody><tr><td></td><td><b>5</b></td><td></td></tr><tr><td></td><td></td><td></td></tr><tr><td></td><td></td><td></td></tr></tbody></table>		<b>5</b>								<table border="1"><tbody><tr><td></td><td><b>42</b></td><td></td></tr><tr><td></td><td></td><td></td></tr><tr><td></td><td></td><td></td></tr></tbody></table>		<b>42</b>							
	<b>12</b>																												
	<b>5</b>																												
	<b>42</b>																												
<table border="1"><tbody><tr><td></td><td></td><td></td></tr><tr><td></td><td></td><td></td></tr><tr><td></td><td><b>56</b></td><td></td></tr></tbody></table>								<b>56</b>		<table border="1"><tbody><tr><td></td><td></td><td></td></tr><tr><td></td><td></td><td></td></tr><tr><td></td><td><b>33</b></td><td></td></tr></tbody></table>								<b>33</b>		<table border="1"><tbody><tr><td></td><td></td><td></td></tr><tr><td></td><td></td><td></td></tr><tr><td></td><td><b>99</b></td><td></td></tr></tbody></table>								<b>99</b>	
	<b>56</b>																												
	<b>33</b>																												
	<b>99</b>																												
<table border="1"><tbody><tr><td><b>32</b></td><td></td><td></td></tr><tr><td></td><td></td><td></td></tr><tr><td></td><td></td><td></td></tr></tbody></table>	<b>32</b>									<table border="1"><tbody><tr><td><b>68</b></td><td></td><td></td></tr><tr><td></td><td></td><td></td></tr><tr><td></td><td></td><td></td></tr></tbody></table>	<b>68</b>									<table border="1"><tbody><tr><td><b>28</b></td><td></td><td></td></tr><tr><td></td><td></td><td></td></tr><tr><td></td><td></td><td></td></tr></tbody></table>	<b>28</b>								
<b>32</b>																													
<b>68</b>																													
<b>28</b>																													

# HUNDRED GRID PUZZLES

Finding more and less

<table border="1"><tbody><tr><td></td><td></td><td></td></tr><tr><td><b>12</b></td><td></td><td></td></tr><tr><td></td><td></td><td></td></tr></tbody></table>				<b>12</b>						<table border="1"><tbody><tr><td></td><td></td><td></td></tr><tr><td><b>65</b></td><td></td><td></td></tr><tr><td></td><td></td><td></td></tr></tbody></table>				<b>65</b>						<table border="1"><tbody><tr><td></td><td></td><td></td></tr><tr><td><b>33</b></td><td></td><td></td></tr><tr><td></td><td></td><td></td></tr></tbody></table>				<b>33</b>					
<b>12</b>																													
<b>65</b>																													
<b>33</b>																													
<table border="1"><tbody><tr><td></td><td><b>62</b></td><td></td></tr><tr><td></td><td></td><td></td></tr><tr><td></td><td></td><td></td></tr></tbody></table>		<b>62</b>								<table border="1"><tbody><tr><td></td><td><b>75</b></td><td></td></tr><tr><td></td><td></td><td></td></tr><tr><td></td><td></td><td></td></tr></tbody></table>		<b>75</b>								<table border="1"><tbody><tr><td></td><td><b>9</b></td><td></td></tr><tr><td></td><td></td><td></td></tr><tr><td></td><td></td><td></td></tr></tbody></table>		<b>9</b>							
	<b>62</b>																												
	<b>75</b>																												
	<b>9</b>																												
<table border="1"><tbody><tr><td></td><td></td><td></td></tr><tr><td></td><td></td><td></td></tr><tr><td><b>92</b></td><td></td><td></td></tr></tbody></table>							<b>92</b>			<table border="1"><tbody><tr><td></td><td></td><td></td></tr><tr><td></td><td></td><td></td></tr><tr><td><b>48</b></td><td></td><td></td></tr></tbody></table>							<b>48</b>			<table border="1"><tbody><tr><td></td><td></td><td></td></tr><tr><td></td><td></td><td></td></tr><tr><td><b>39</b></td><td></td><td></td></tr></tbody></table>							<b>39</b>		
<b>92</b>																													
<b>48</b>																													
<b>39</b>																													
<table border="1"><tbody><tr><td><b>23</b></td><td></td><td></td></tr><tr><td></td><td></td><td></td></tr><tr><td></td><td></td><td></td></tr></tbody></table>	<b>23</b>									<table border="1"><tbody><tr><td><b>71</b></td><td></td><td></td></tr><tr><td></td><td></td><td></td></tr><tr><td></td><td></td><td></td></tr></tbody></table>	<b>71</b>									<table border="1"><tbody><tr><td><b>5</b></td><td></td><td></td></tr><tr><td></td><td></td><td></td></tr><tr><td></td><td></td><td></td></tr></tbody></table>	<b>5</b>								
<b>23</b>																													
<b>71</b>																													
<b>5</b>																													

# HUNDRED GRID PUZZLES

Finding more and less

<b>22</b>		

<b>53</b>		

<b>57</b>		

	<b>7</b>	

	<b>35</b>	

	<b>77</b>	

<b>62</b>		

<b>97</b>		

<b>93</b>		

<b>41</b>		

<b>8</b>		

<b>11</b>		

# Finding more and less flashcard

**FILL IN THE CHART**

	<b>16</b>	

**FILL IN THE CHART**

<b>5</b>	<b>6</b>	<b>7</b>
	<b>16</b>	
	<b>26</b>	

**FILL IN THE CHART**

	<b>27</b>	

**FILL IN THE CHART**

<b>16</b>	<b>17</b>	<b>18</b>
	<b>27</b>	
	<b>37</b>	

**FILL IN THE CHART**

	<b>67</b>	

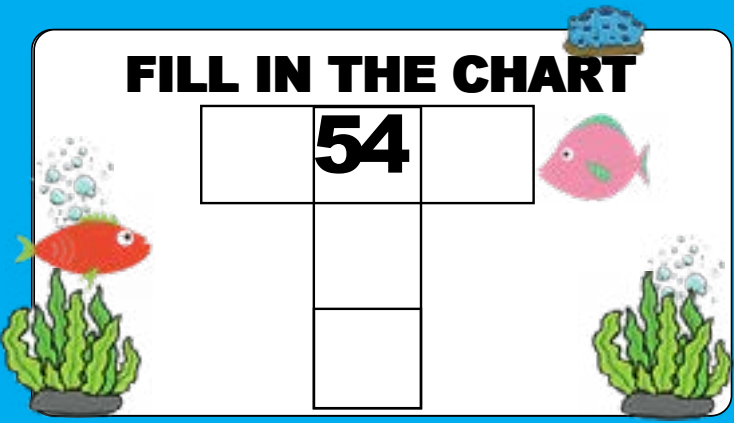
**FILL IN THE CHART**

<b>56</b>	<b>57</b>	<b>58</b>
	<b>67</b>	
	<b>77</b>	

# Finding more and less flashcard

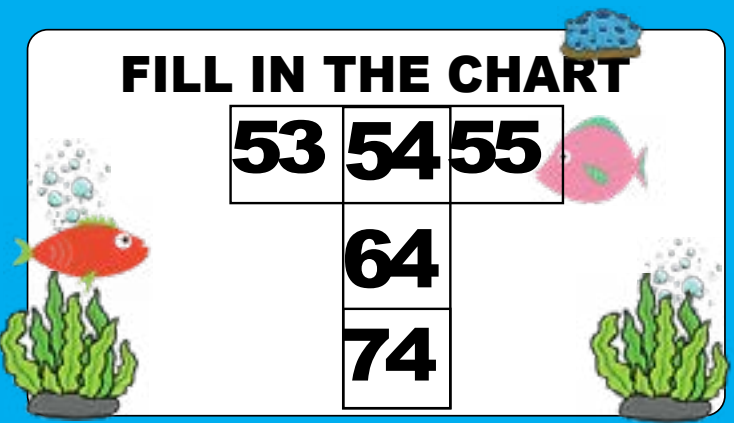
**FILL IN THE CHART**

	<b>54</b>	



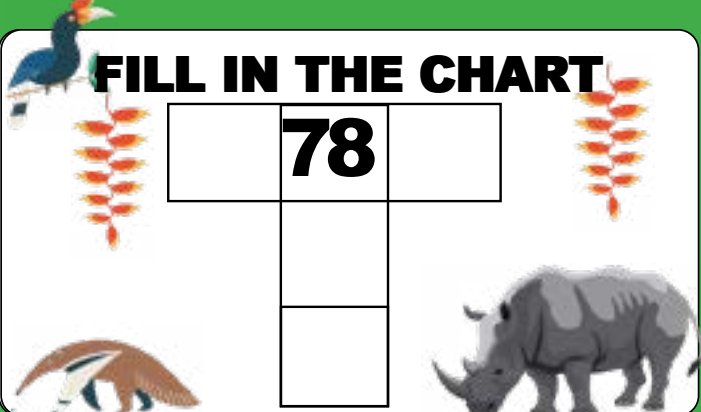
**FILL IN THE CHART**

<b>53</b>	<b>54</b>	<b>55</b>
	<b>64</b>	
	<b>74</b>	



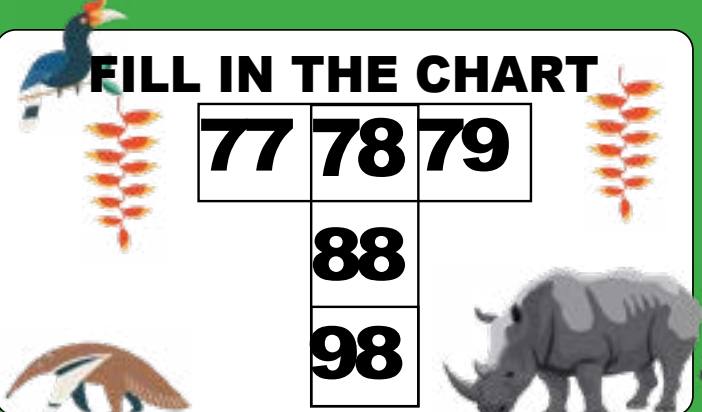
**FILL IN THE CHART**

	<b>78</b>	




**FILL IN THE CHART**

<b>77</b>	<b>78</b>	<b>79</b>
	<b>88</b>	
	<b>98</b>	



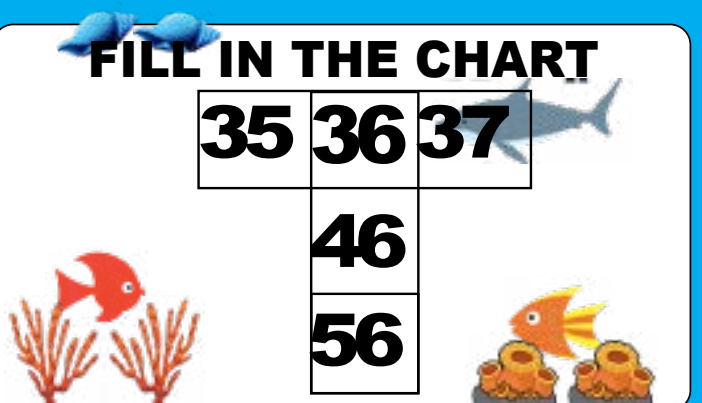
**FILL IN THE CHART**

	<b>36</b>	



**FILL IN THE CHART**

<b>35</b>	<b>36</b>	<b>37</b>
	<b>46</b>	
	<b>56</b>	



# Finding more and less flashcard

**FILL IN THE CHART**

		28

**FILL IN THE CHART**

7	8	9
	18	
	28	

**FILL IN THE CHART**

		66

**FILL IN THE CHART**

45	46	47
	56	
	66	

**FILL IN THE CHART**

		93



**FILL IN THE CHART**




72	73	74
	83	
	93	





# Finding more and less flashcard




**FILL IN THE CHART**

43		
		









**FILL IN THE CHART**

43	44	45
		
	54	
	64	









**FILL IN THE CHART**

25		
		









**FILL IN THE CHART**

25	26	27
		
	36	
	46	









**FILL IN THE CHART**

74		
		

**FILL IN THE CHART**

74	75	76
		
	85	
	95	

# Finding more and less flashcard

**FILL IN THE CHART**



--	--	--

**15**



**FILL IN THE CHART**



<b>4</b>	<b>5</b>	<b>6</b>
----------	----------	----------

**15**

**25**



**FILL IN THE CHART**



--	--	--

**23**



**FILL IN THE CHART**

<b>12</b>	<b>13</b>	<b>14</b>
-----------	-----------	-----------

**23**

**33**



**FILL IN THE CHART**



--	--	--

**12**



**FILL IN THE CHART**

<b>1</b>	<b>2</b>	<b>3</b>
----------	----------	----------





**12**

**22**






# Finding more and less flashcard




**FILL IN THE CHART**

	<input type="text"/>	<b>55</b>	<input type="text"/>	
				



**FILL IN THE CHART**

	<b>54</b>	<b>55</b>	<b>56</b>	
		<b>65</b>		
		<b>75</b>		





**FILL IN THE CHART**

	<input type="text"/>	<b>79</b>	<input type="text"/>	
				


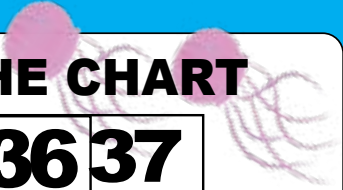

**FILL IN THE CHART**

	<b>78</b>	<b>79</b>	<b>80</b>	
		<b>89</b>		
		<b>99</b>		

**FILL IN THE CHART**



	<input type="text"/>	<b>36</b>	<input type="text"/>	
				



**FILL IN THE CHART**

	<b>35</b>	<b>36</b>	<b>37</b>	
		<b>46</b>		
		<b>56</b>		

# Finding more and less flashcard






**FILL IN THE CHART**

		
		
	<b>28</b>	





**FILL IN THE CHART**

<b>7</b>	<b>8</b>	<b>9</b>
	<b>18</b>	
	<b>28</b>	





**FILL IN THE CHART**

	<b>34</b>	





**FILL IN THE CHART**

<b>13</b>	<b>14</b>	<b>15</b>
	<b>24</b>	
	<b>34</b>	





**FILL IN THE CHART**

	<b>76</b>	

**FILL IN THE CHART**

<b>55</b>	<b>56</b>	<b>57</b>
	<b>66</b>	
	<b>76</b>	

# Finding more and less flashcard

**FILL IN THE CHART**

21		

**FILL IN THE CHART**

21	22	23
	32	
	42	

**FILL IN THE CHART**

61		

**FILL IN THE CHART**

61	62	63
	72	
	82	

**FILL IN THE CHART**

1		

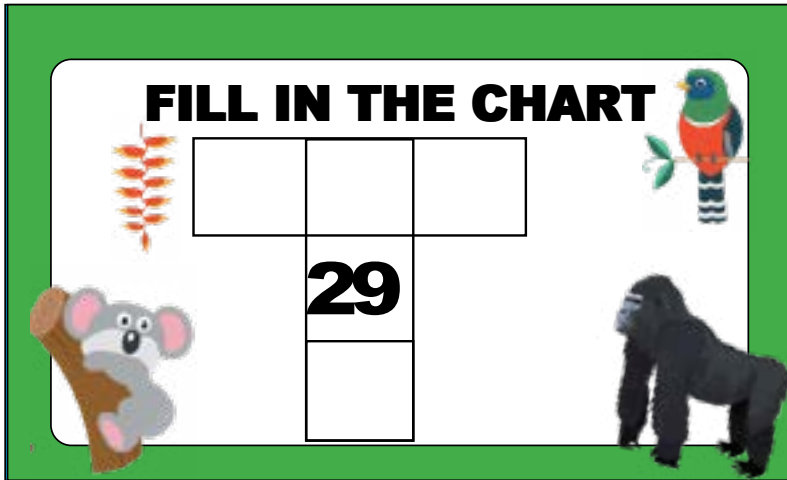
**FILL IN THE CHART**

1	2	3
	12	
	22	

# Finding more and less flashcard


**FILL IN THE CHART**

	<b>29</b>	




**FILL IN THE CHART**

	<b>18</b>	<b>19</b>	<b>20</b>
	<b>29</b>		
	<b>39</b>		




**FILL IN THE CHART**

	<b>39</b>	



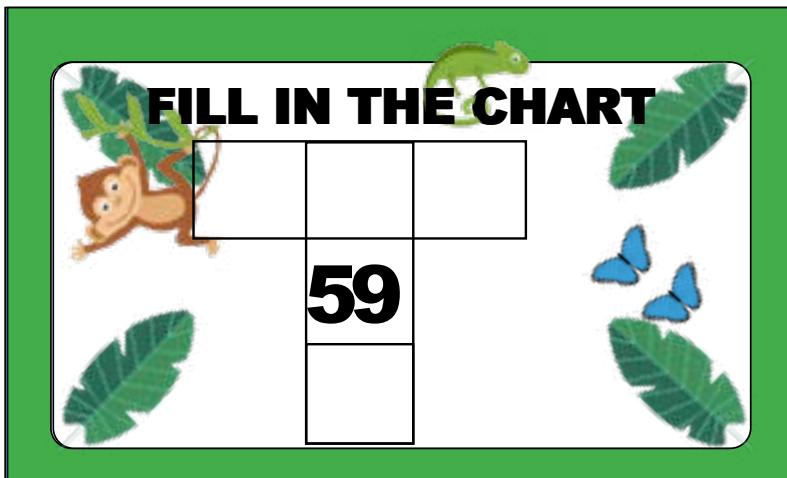
**FILL IN THE CHART**

	<b>28</b>	<b>29</b>	<b>30</b>
	<b>39</b>		
	<b>49</b>		



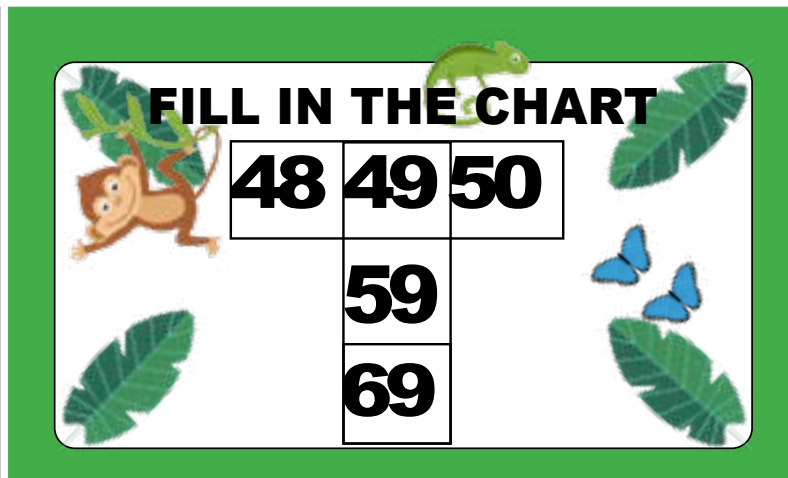
**FILL IN THE CHART**

	<b>59</b>	



**FILL IN THE CHART**

	<b>48</b>	<b>49</b>	<b>50</b>
	<b>59</b>		
	<b>69</b>		



# Finding more and less flashcard

**FILL IN THE CHART**

	12	

**FILL IN THE CHART**

11	12	13
	22	
	32	

**FILL IN THE CHART**

	5	

**FILL IN THE CHART**

4	5	6
	15	
	25	

**FILL IN THE CHART**

	42	

**FILL IN THE CHART**

41	42	43
	52	
	62	

# Finding more and less flashcard

**FILL IN THE CHART**



--	--	--



**56**



**FILL IN THE CHART**



<b>35</b>	<b>36</b>	<b>37</b>
-----------	-----------	-----------



**46**

**56**



**FILL IN THE CHART**



--	--	--



**33**



**FILL IN THE CHART**

<b>12</b>	<b>13</b>	<b>14</b>
-----------	-----------	-----------



**23**

**33**



**FILL IN THE CHART**



--	--	--

**99**



**FILL IN THE CHART**

<b>78</b>	<b>79</b>	<b>80</b>
-----------	-----------	-----------



**89**

**99**





# Finding more and less flashcard

**FILL IN THE CHART**

32		

**FILL IN THE CHART**

32	33	34
	43	
	53	

**FILL IN THE CHART**

68		

**FILL IN THE CHART**

68	69	70
	79	
	89	

**FILL IN THE CHART**

28		

**FILL IN THE CHART**

28	29	30
	39	
	49	

# Finding more and less flashcard

**FILL IN THE CHART**

	<b>12</b>	

**FILL IN THE CHART**

<b>1</b>	<b>2</b>	<b>3</b>
	<b>12</b>	
	<b>22</b>	

**FILL IN THE CHART**

	<b>65</b>	

**FILL IN THE CHART**

<b>54</b>	<b>55</b>	<b>56</b>
	<b>65</b>	
	<b>75</b>	

**FILL IN THE CHART**

	<b>33</b>	

**FILL IN THE CHART**

<b>22</b>	<b>23</b>	<b>24</b>
	<b>33</b>	
	<b>43</b>	

# Finding more and less flashcard

**FILL IN THE CHART**

	<b>62</b>	

**FILL IN THE CHART**

<b>61</b>	<b>62</b>	<b>63</b>
	<b>72</b>	
	<b>82</b>	

**FILL IN THE CHART**

	<b>75</b>	

**FILL IN THE CHART**

<b>74</b>	<b>75</b>	<b>76</b>
	<b>85</b>	
	<b>95</b>	

**FILL IN THE CHART**

	<b>9</b>	

**FILL IN THE CHART**

<b>8</b>	<b>9</b>	<b>10</b>
	<b>19</b>	
	<b>29</b>	



# Finding more and less flashcard

**FILL IN THE CHART**

23		

**FILL IN THE CHART**

23	24	25
	34	
	44	

**FILL IN THE CHART**

71		

**FILL IN THE CHART**

71	72	73
	82	
	92	

**FILL IN THE CHART**

5		

**FILL IN THE CHART**

5	6	7
	16	
	26	

# Finding more and less flashcard

FILL IN THE CHART

	22	




FILL IN THE CHART

11	12	13
	22	
	32	




FILL IN THE CHART

	53	



FILL IN THE CHART

42	43	44
	53	
	63	



FILL IN THE CHART

	57	







FILL IN THE CHART

46	47	48
	57	
	67	







# Finding more and less flashcard




**FILL IN THE CHART**

	<input type="text"/>	<b>7</b>	<input type="text"/>	
				




**FILL IN THE CHART**

	<b>6</b>	<b>7</b>	<b>8</b>	
		<b>17</b>		
		<b>27</b>		





**FILL IN THE CHART**

	<input type="text"/>	<b>35</b>	<input type="text"/>	
				


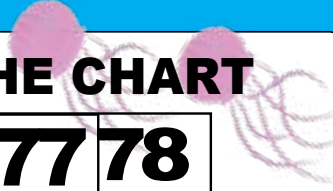


**FILL IN THE CHART**

	<b>34</b>	<b>35</b>	<b>36</b>	
		<b>45</b>		
		<b>55</b>		

**FILL IN THE CHART**

	<input type="text"/>	<b>77</b>	<input type="text"/>	
				


**FILL IN THE CHART**

	<b>76</b>	<b>77</b>	<b>78</b>	
		<b>87</b>		
		<b>97</b>		

# Finding more and less flashcard


**FILL IN THE CHART**

	<b>62</b>	




**FILL IN THE CHART**

<b>41</b>	<b>42</b>	<b>43</b>
	<b>52</b>	
	<b>62</b>	




**FILL IN THE CHART**

	<b>97</b>	




**FILL IN THE CHART**

<b>76</b>	<b>77</b>	<b>78</b>
	<b>87</b>	
	<b>97</b>	




**FILL IN THE CHART**

	<b>93</b>	



**FILL IN THE CHART**

<b>72</b>	<b>73</b>	<b>74</b>
	<b>83</b>	
	<b>93</b>	





# Finding more and less flashcard

**FILL IN THE CHART**

41		

**FILL IN THE CHART**

41	42	43
	52	
	62	

**FILL IN THE CHART**

8		

**FILL IN THE CHART**

8	9	10
	19	
	29	

**FILL IN THE CHART**

11		

**FILL IN THE CHART**

11	12	13
	22	
	32	