

# HUNDRED GRID PUZZLES

Finding more and less

The image contains several grid puzzles of various shapes and sizes. Each puzzle consists of a set of empty cells with a number placed in one of the cells. The numbers are: 16, 8, 55, 91, 1, 50, 78, and 32. The grids are arranged as follows:

- 16:** A vertical column of 5 cells with the number 16 in the second cell from the top. To its right is a horizontal row of 4 empty cells.
- 8:** A horizontal row of 4 cells with the number 8 in the second cell from the left. Below it is a vertical column of 4 empty cells.
- 55:** A horizontal row of 5 cells with the number 55 in the third cell from the left. Above it is a horizontal row of 4 empty cells.
- 91:** A vertical column of 3 cells with the number 91 in the bottom cell. To its right is a horizontal row of 4 empty cells.
- 1:** A horizontal row of 4 cells with the number 1 in the first cell from the left. Below it is a vertical column of 5 empty cells.
- 50:** A vertical column of 5 cells with the number 50 in the bottom cell. To its right is a horizontal row of 4 empty cells.
- 78:** A horizontal row of 7 cells with the number 78 in the fifth cell from the left. Below it is a vertical column of 2 empty cells.
- 32:** A 3x3 grid with the number 32 in the middle cell.

# HUNDRED GRID PUZZLES

Finding more and less

A crossword puzzle grid with the following numbers placed in the starting cells of words:

- 55**: Top-left corner, starting a 4x4 square.
- 12**: Top-right corner, starting a 4x2 horizontal word.
- 41**: Middle-left, starting a 3x4 horizontal word.
- 65**: Middle, starting a 2x4 horizontal word.
- 60**: Middle-right, starting a 4x5 horizontal word.
- 43**: Center, starting a 3x3 square.
- 21**: Bottom-left, starting a 4x5 horizontal word.
- 63**: Bottom-middle, starting a 2x4 horizontal word.
- 88**: Bottom-right, starting a 2x2 square.

# HUNDRED GRID PUZZLES

Finding more and less

The image contains several grid puzzles of various shapes and sizes. Each puzzle has a number placed in one of its cells. The numbers are: 15, 35, 44, 7, 90, 78, 22, 55, and 80. The grids are arranged in a scattered pattern across the page.



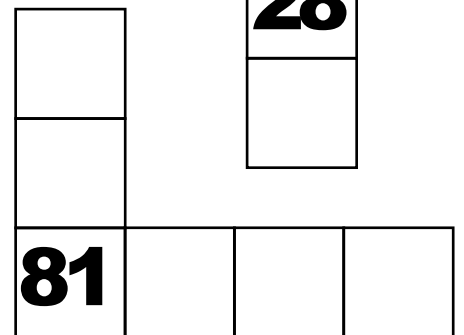

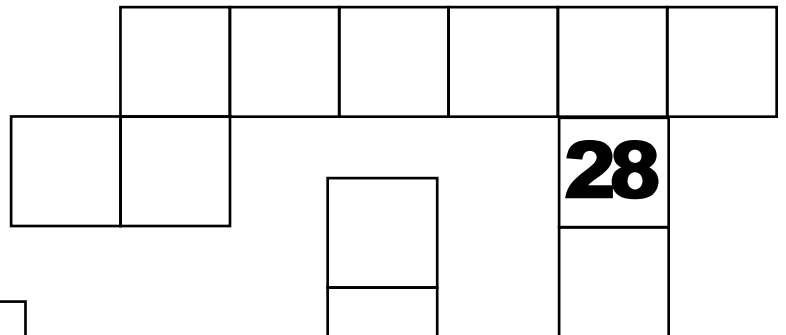


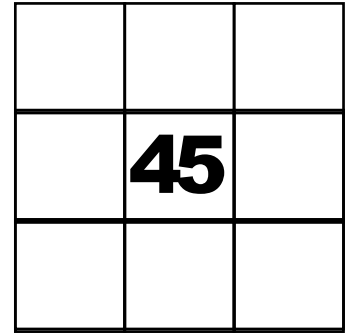
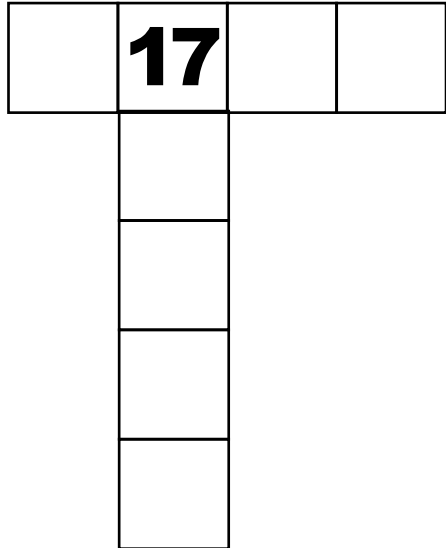
# HUNDRED GRID PUZZLES

Finding more and less

The image contains several grid puzzles of various shapes. Each puzzle has a number placed in a specific cell. The numbers are: 68, 76, 51, 21, 40, 11, 44, 2, and 15. The grids are arranged in a scattered pattern across the page.

# HUNDRED GRID PUZZLES

Finding more and less



# Finding more and less flashcard

**FILL IN THE CHART**

16				

**FILL IN THE CHART**

6				
16	17	18	19	20
26				
36				
46				

**FILL IN THE CHART**

		55		

**FILL IN THE CHART**

			45	46
			47	48
		53	54	55
		56		

**FILL IN THE CHART**

	8		

**FILL IN THE CHART**

	7	8	9
		18	
		28	
		38	
		48	

# Finding more and less flashcard

**FILL IN THE CHART**

	64		

**FILL IN THE CHART**

				55
61	62	63	64	65
				75
				85

**FILL IN THE CHART**

91			

**FILL IN THE CHART**

71			
81			
91	92	93	94

**FILL IN THE CHART**

1			

**FILL IN THE CHART**

1	2	3	4
10			14
20			24
30			
40	41		

# Finding more and less flashcard

**FILL IN THE CHART**

									50

**FILL IN THE CHART**


**FILL IN THE CHART**


**FILL IN THE CHART**


**FILL IN THE CHART**


**FILL IN THE CHART**




# Finding more and less flashcard

**FILL IN THE CHART**

55			

**FILL IN THE CHART**

55	56	57	58
65			68
75			78
85			
95	96		

**FILL IN THE CHART**

41			

**FILL IN THE CHART**

21			
31			
41	42	43	44

**FILL IN THE CHART**

	12		

**FILL IN THE CHART**

10	12	13	14
	22		
	32		
	42		
	52		

# Finding more and less flashcard

**FILL IN THE CHART**

	65		

**FILL IN THE CHART**

		55	56	57	58
63	64	65	66		

**FILL IN THE CHART**

	43	

**FILL IN THE CHART**

		32	33	34
		42	43	44
		52	53	54

**FILL IN THE CHART**

	63		

**FILL IN THE CHART**

					55
61	62	63	64	65	
					75
					85

# Finding more and less flashcard

**FILL IN THE CHART**

				<b>88</b>	

**FILL IN THE CHART**

	<b>74</b>	<b>75</b>	<b>76</b>	<b>77</b>	<b>78</b>	<b>79</b>
<b>83</b>	<b>84</b>				<b>88</b>	
					<b>98</b>	

**FILL IN THE CHART**

				<b>60</b>	

**FILL IN THE CHART**

	<b>26</b>				
	<b>36</b>				
	<b>46</b>				
	<b>56</b>	<b>57</b>	<b>58</b>	<b>59</b>	<b>60</b>
	<b>66</b>				
<b>75</b>	<b>76</b>	<b>77</b>	<b>78</b>		

**FILL IN THE CHART**

<b>21</b>					

**FILL IN THE CHART**

	<b>11</b>				
	<b>21</b>	<b>22</b>	<b>23</b>	<b>24</b>	<b>25</b>
	<b>31</b>				
	<b>41</b>				
	<b>51</b>				

# Finding more and less flashcard

**FILL IN THE CHART**

15				

**FILL IN THE CHART**

5				
15	16	17	18	19
25				
35				
45				

**FILL IN THE CHART**

		44		

**FILL IN THE CHART**

						36
		42	43	44	45	46
						56
						66

**FILL IN THE CHART**

	35			

**FILL IN THE CHART**

		25	26	27	28
32	34	35	36		

# Finding more and less flashcard

**FILL IN THE CHART**

	<b>7</b>		

**FILL IN THE CHART**

<b>6</b>	<b>7</b>	<b>8</b>	<b>9</b>
	<b>17</b>		
	<b>27</b>		
	<b>37</b>		
	<b>47</b>		

**FILL IN THE CHART**

<b>90</b>			

**FILL IN THE CHART**

<b>70</b>			
<b>80</b>			
<b>90</b>	<b>91</b>	<b>92</b>	<b>93</b>

**FILL IN THE CHART**

				<b>78</b>	

**FILL IN THE CHART**

		<b>64</b>	<b>65</b>	<b>66</b>	<b>67</b>	<b>68</b>	<b>69</b>
<b>73</b>	<b>74</b>					<b>78</b>	
						<b>88</b>	

# Finding more and less flashcard

**FILL IN THE CHART**

	55	

**FILL IN THE CHART**

44	45	46
54	55	56
64	65	66

**FILL IN THE CHART**

22				

**FILL IN THE CHART**

22	23	24	25	
32				35
42				45
52				
62	63			

**FILL IN THE CHART**

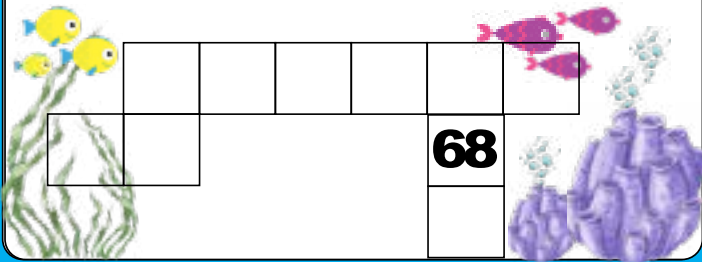
				80

**FILL IN THE CHART**

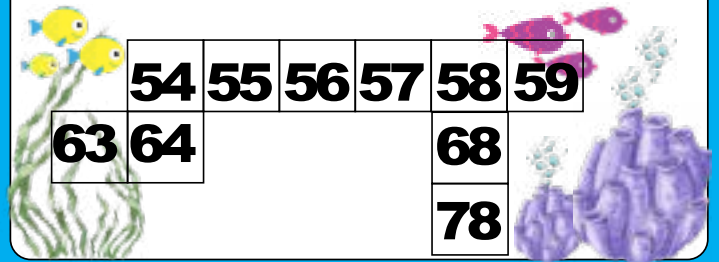
				80

# Finding more and less flashcard


**FILL IN THE CHART**



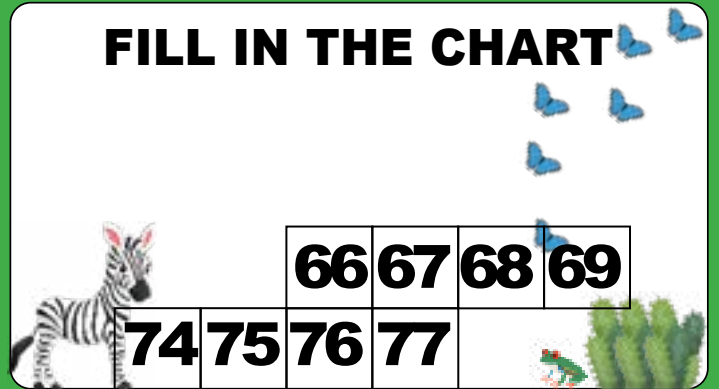
**FILL IN THE CHART**




**FILL IN THE CHART**




**FILL IN THE CHART**



**FILL IN THE CHART**



**FILL IN THE CHART**



# Finding more and less flashcard

**FILL IN THE CHART**

21			

**FILL IN THE CHART**

21	22	23	24
31			34
41			44
51			
61	62		

**FILL IN THE CHART**

				40

**FILL IN THE CHART**

6				
16				
26				
36	37	38	39	40
46				
56	57	58		

**FILL IN THE CHART**

		44		

**FILL IN THE CHART**

				36
42	43	44	45	46
				56
				66



# Finding more and less flashcard

**FILL IN THE CHART**

11				

**FILL IN THE CHART**

1				
11	12	13	14	15
21				
31				
41				

**FILL IN THE CHART**

	2		

**FILL IN THE CHART**

1	2	3	4
12			
22			
32			
42			

**FILL IN THE CHART**

	15	

**FILL IN THE CHART**

4	5	6
14	15	16
24	25	26

# Finding more and less flashcard

**FILL IN THE CHART**

	17		

**FILL IN THE CHART**

16	17	18	19
	27		
	37		
	47		
	57		

**FILL IN THE CHART**

	45	

**FILL IN THE CHART**

34	35	36
44	45	46
54	55	56

**FILL IN THE CHART**

				80

**FILL IN THE CHART**

	46				
	56				
	66				
	76	77	78	79	80
	86				
95	96	97	98		

# Finding more and less flashcard

**FILL IN THE CHART**

5			

**FILL IN THE CHART**

5	6	7	8
15			18
25			28
35			
45	46		

**FILL IN THE CHART**

		eye		28

**FILL IN THE CHART**

14	15	16	17	18	19
23	24				28
					38

**FILL IN THE CHART**

81			

**FILL IN THE CHART**

	61		
	71		
	81	82	83 84

# Finding more and less flashcard

**FILL IN THE CHART**

		63		

**FILL IN THE CHART**

				55
61	62	63	64	65
				75
				85

**FILL IN THE CHART**

		35		

**FILL IN THE CHART**

		25	26	27	28
33	34	35	36		

**FILL IN THE CHART**

		24		

**FILL IN THE CHART**

		14		
24	25	26	27	28
34				
44				
54				