

# HUNDRED GRID PUZZLES

Finding more and less

<b>71</b>		

<b>11</b>		

<b>45</b>		

<b>33</b>		

<b>23</b>		

<b>78</b>		

<b>51</b>		

<b>66</b>		

<b>77</b>		

<b>63</b>		

<b>48</b>		

<b>27</b>		

# HUNDRED GRID PUZZLES

Finding more and less

<b>11</b>		

<b>25</b>		

<b>23</b>		

<b>54</b>		

<b>46</b>		

<b>13</b>		

<b>17</b>		

<b>28</b>		

<b>71</b>		

<b>32</b>		

<b>54</b>		

<b>65</b>		

# HUNDRED GRID PUZZLES

Finding more and less

<b>44</b>	

<b>23</b>	

<b>17</b>	

<b>55</b>	

<b>34</b>	

<b>78</b>	

<b>77</b>	

<b>16</b>	

<b>87</b>	

<b>32</b>	

<b>26</b>	

<b>54</b>	

# HUNDRED GRID PUZZLES

Finding more and less

**71**

**88**

**22**

**21**

**44**

**77**

**34**

**68**

**32**

**11**

**57**

**54**

# HUNDRED GRID PUZZLES

Finding more and less

**71**

**23**

**11**

**28**

**56**

**17**

**63**

**48**

**44**





**51**

**53**





**87**

# Finding more and less flashcard

**FILL IN THE CHART**

				
	<b>71</b>			
				

**FILL IN THE CHART**

	<b>61</b>		<b>63</b>	
	<b>71</b>	<b>72</b>	<b>73</b>	
	<b>81</b>		<b>83</b>	




**FILL IN THE CHART**

				
	<b>11</b>			
				




**FILL IN THE CHART**

	<b>1</b>		<b>3</b>	
	<b>11</b>	<b>12</b>	<b>13</b>	
	<b>21</b>		<b>23</b>	

**FILL IN THE CHART**

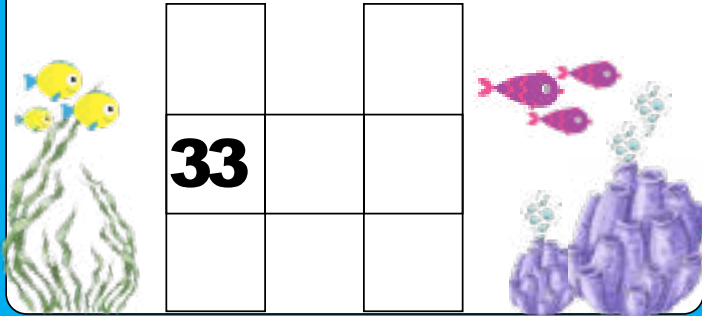
				
	<b>45</b>			
				

**FILL IN THE CHART**

	<b>35</b>		<b>37</b>	
	<b>45</b>	<b>46</b>	<b>47</b>	
	<b>55</b>		<b>57</b>	

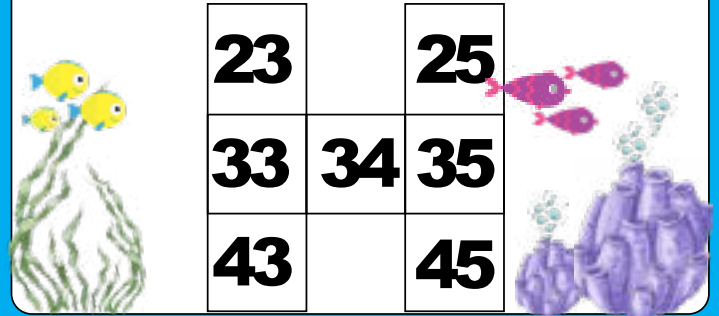
# Finding more and less flashcard

FILL IN THE CHART




<b>33</b>		

FILL IN THE CHART




<b>23</b>		<b>25</b>
<b>33</b>	<b>34</b>	<b>35</b>
<b>43</b>		<b>45</b>

FILL IN THE CHART




<b>23</b>		

FILL IN THE CHART




<b>13</b>		<b>15</b>
<b>23</b>	<b>24</b>	<b>25</b>
<b>33</b>		<b>35</b>

FILL IN THE CHART



<b>78</b>		

FILL IN THE CHART



<b>68</b>		<b>70</b>
<b>78</b>	<b>79</b>	<b>80</b>
<b>88</b>		<b>90</b>

# Finding more and less flashcard

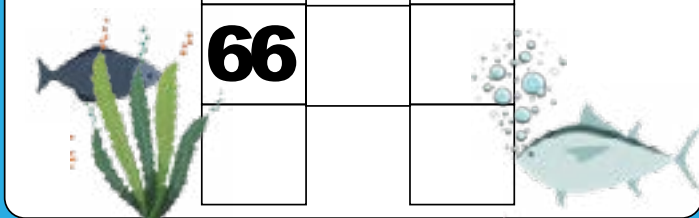
**FILL IN THE CHART**



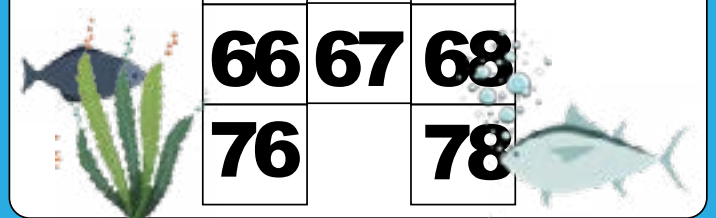
**FILL IN THE CHART**



**FILL IN THE CHART**



**FILL IN THE CHART**



**FILL IN THE CHART**




**FILL IN THE CHART**






# Finding more and less flashcard

**FILL IN THE CHART**



<b>63</b>		

**FILL IN THE CHART**




<b>53</b>		<b>55</b>
<b>63</b>	<b>64</b>	<b>65</b>
<b>73</b>		<b>75</b>

**FILL IN THE CHART**



<b>48</b>		

**FILL IN THE CHART**



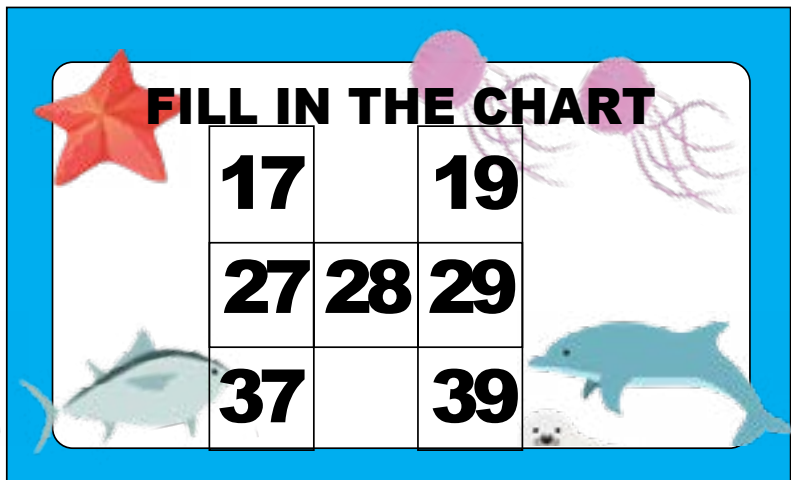
<b>38</b>		<b>40</b>
<b>48</b>	<b>49</b>	<b>50</b>
<b>58</b>		<b>60</b>

**FILL IN THE CHART**



<b>27</b>		

**FILL IN THE CHART**



<b>17</b>		<b>19</b>
<b>27</b>	<b>28</b>	<b>29</b>
<b>37</b>		<b>39</b>

# Finding more and less flashcard

**FILL IN THE CHART**

<b>11</b>		

**FILL IN THE CHART**

<b>1</b>		<b>3</b>
<b>11</b>	<b>12</b>	<b>13</b>
<b>21</b>		<b>23</b>

**FILL IN THE CHART**

<b>25</b>		

**FILL IN THE CHART**

<b>15</b>		<b>17</b>
<b>25</b>	<b>26</b>	<b>27</b>
<b>35</b>		<b>37</b>

**FILL IN THE CHART**

<b>23</b>		

**FILL IN THE CHART**

<b>13</b>		<b>15</b>
<b>23</b>	<b>24</b>	<b>25</b>
<b>33</b>		<b>35</b>

# Finding more and less flashcard

**FILL IN THE CHART**

<b>54</b>		

**FILL IN THE CHART**

<b>44</b>		<b>46</b>
<b>54</b>	<b>55</b>	<b>56</b>
<b>64</b>		<b>66</b>

**FILL IN THE CHART**

<b>46</b>		

**FILL IN THE CHART**

<b>36</b>		<b>38</b>
<b>46</b>	<b>47</b>	<b>48</b>
<b>56</b>		<b>58</b>

**FILL IN THE CHART**

<b>13</b>		

**FILL IN THE CHART**

<b>3</b>		<b>5</b>
<b>13</b>	<b>14</b>	<b>15</b>
<b>23</b>		<b>25</b>

# Finding more and less flashcard

**FILL IN THE CHART**

<b>17</b>		

**FILL IN THE CHART**

<b>7</b>		<b>9</b>
<b>17</b>	<b>18</b>	<b>19</b>
<b>27</b>		<b>29</b>

**FILL IN THE CHART**

<b>28</b>		

**FILL IN THE CHART**

<b>18</b>		<b>20</b>
<b>28</b>	<b>29</b>	<b>30</b>
<b>38</b>		<b>40</b>

**FILL IN THE CHART**

<b>71</b>		

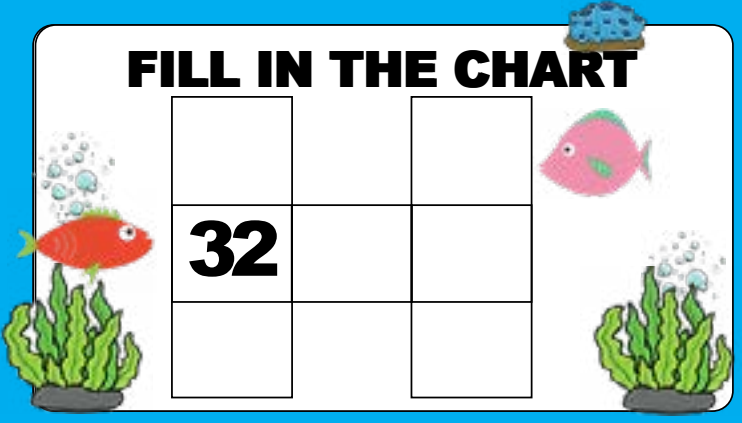
**FILL IN THE CHART**

<b>61</b>		<b>63</b>
<b>71</b>	<b>72</b>	<b>73</b>
<b>81</b>		<b>83</b>

# Finding more and less flashcard

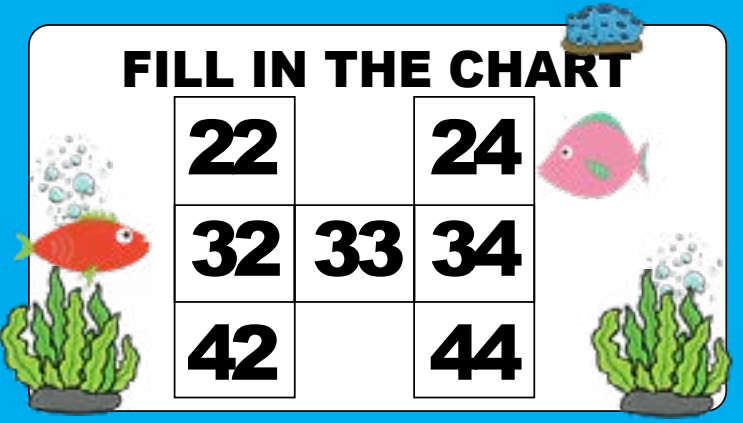
**FILL IN THE CHART**

<b>32</b>		




**FILL IN THE CHART**

<b>22</b>		<b>24</b>
<b>32</b>	<b>33</b>	<b>34</b>
<b>42</b>		<b>44</b>




**FILL IN THE CHART**

<b>54</b>		




**FILL IN THE CHART**

<b>44</b>		<b>46</b>
<b>54</b>	<b>55</b>	<b>56</b>
<b>64</b>		<b>66</b>



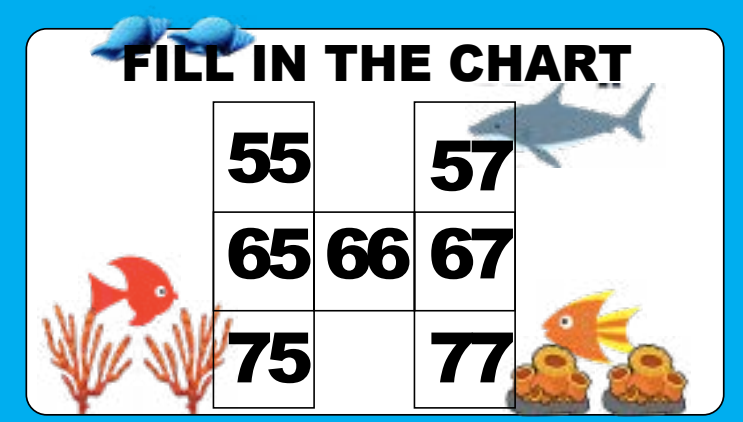
**FILL IN THE CHART**

<b>65</b>		



**FILL IN THE CHART**

<b>55</b>		<b>57</b>
<b>65</b>	<b>66</b>	<b>67</b>
<b>75</b>		<b>77</b>



# Finding more and less flashcard

**FILL IN THE CHART**

	<b>44</b>	

**FILL IN THE CHART**

	<b>34</b>		<b>36</b>
	<b>44</b>	<b>45</b>	<b>46</b>
	<b>54</b>		<b>56</b>

**FILL IN THE CHART**

	<b>23</b>	

**FILL IN THE CHART**

	<b>13</b>		<b>15</b>
	<b>23</b>	<b>24</b>	<b>25</b>
	<b>33</b>		<b>35</b>

**FILL IN THE CHART**

	<b>17</b>	

**FILL IN THE CHART**

	<b>7</b>		<b>9</b>
	<b>17</b>	<b>18</b>	<b>19</b>
	<b>27</b>		<b>29</b>

# Finding more and less flashcard

**FILL IN THE CHART**

<b>55</b>		

**FILL IN THE CHART**

	<b>45</b>	<b>47</b>
<b>55</b>	<b>56</b>	<b>57</b>
<b>65</b>		<b>67</b>

**FILL IN THE CHART**

<b>34</b>		

**FILL IN THE CHART**

	<b>24</b>	<b>26</b>
<b>34</b>	<b>35</b>	<b>36</b>
<b>44</b>		<b>46</b>

**FILL IN THE CHART**

<b>78</b>		

**FILL IN THE CHART**

	<b>68</b>	<b>70</b>
<b>78</b>	<b>79</b>	<b>80</b>
<b>88</b>		<b>90</b>

# Finding more and less flashcard

**FILL IN THE CHART**

77		

**FILL IN THE CHART**

67		69
77	78	79
87		89

**FILL IN THE CHART**

16		

**FILL IN THE CHART**

6		8
16	17	18
26		28

**FILL IN THE CHART**

87		




**FILL IN THE CHART**

77		79
87	88	89
97		99






# Finding more and less flashcard

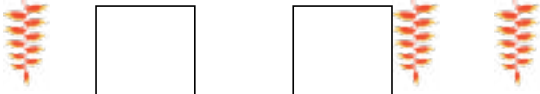

**FILL IN THE CHART**

		
	<b>32</b>	



**FILL IN THE CHART**

	<b>22</b>		<b>24</b>	
	<b>32</b>	<b>33</b>	<b>34</b>	
	<b>42</b>		<b>44</b>	



**FILL IN THE CHART**

	<b>26</b>	



**FILL IN THE CHART**

	<b>16</b>		<b>18</b>	
	<b>26</b>	<b>27</b>	<b>28</b>	
	<b>36</b>		<b>38</b>	

**FILL IN THE CHART**

	<b>54</b>	

**FILL IN THE CHART**

	<b>44</b>		<b>46</b>	
	<b>54</b>	<b>55</b>	<b>56</b>	
	<b>64</b>		<b>66</b>	

# Finding more and less flashcard

**FILL IN THE CHART**

<b>71</b>		

**FILL IN THE CHART**

	<b>61</b>		<b>63</b>
<b>71</b>	<b>72</b>	<b>73</b>	
<b>81</b>		<b>83</b>	

**FILL IN THE CHART**

<b>88</b>		

**FILL IN THE CHART**

	<b>78</b>		<b>80</b>
<b>88</b>	<b>89</b>	<b>90</b>	
<b>98</b>		<b>100</b>	

**FILL IN THE CHART**


<b>22</b>		

**FILL IN THE CHART**

	<b>12</b>		<b>14</b>
<b>22</b>	<b>23</b>	<b>24</b>	
<b>32</b>		<b>34</b>	


# Finding more and less flashcard

**FILL IN THE CHART**




<b>21</b>		

**FILL IN THE CHART**




<b>11</b>		<b>13</b>
<b>21</b>	<b>22</b>	<b>23</b>
<b>31</b>		<b>33</b>

**FILL IN THE CHART**




<b>44</b>		

**FILL IN THE CHART**




<b>34</b>		<b>36</b>
<b>44</b>	<b>45</b>	<b>46</b>
<b>54</b>		<b>56</b>

**FILL IN THE CHART**



<b>77</b>		

**FILL IN THE CHART**



<b>67</b>		<b>69</b>
<b>77</b>	<b>78</b>	<b>79</b>
<b>87</b>		<b>89</b>

# Finding more and less flashcard

**FILL IN THE CHART**

	34	

**FILL IN THE CHART**

	24	26	
	34	35	36
	44	46	

**FILL IN THE CHART**

	68	

**FILL IN THE CHART**

	58	60	
	68	69	70
	78	80	

**FILL IN THE CHART**

	32	

**FILL IN THE CHART**

	22	24	
	32	33	34
	42	44	

# Finding more and less flashcard

**FILL IN THE CHART**

<b>11</b>		

**FILL IN THE CHART**

<b>1</b>		<b>3</b>
<b>11</b>	<b>12</b>	<b>13</b>
<b>21</b>		<b>23</b>

**FILL IN THE CHART**

<b>57</b>		

**FILL IN THE CHART**

<b>47</b>		<b>49</b>
<b>57</b>	<b>58</b>	<b>59</b>
<b>67</b>		<b>69</b>

**FILL IN THE CHART**

<b>54</b>		

**FILL IN THE CHART**

<b>44</b>		<b>46</b>
<b>54</b>	<b>55</b>	<b>56</b>
<b>64</b>		<b>66</b>

# Finding more and less flashcard

**FILL IN THE CHART**

<b>71</b>		

**FILL IN THE CHART**

<b>61</b>		<b>63</b>
<b>71</b>	<b>72</b>	<b>73</b>
<b>81</b>		<b>83</b>

**FILL IN THE CHART**

<b>23</b>		

**FILL IN THE CHART**

<b>13</b>		<b>15</b>
<b>23</b>	<b>24</b>	<b>25</b>
<b>33</b>		<b>35</b>

**FILL IN THE CHART**

<b>11</b>		

**FILL IN THE CHART**

<b>1</b>		<b>3</b>
<b>11</b>	<b>12</b>	<b>13</b>
<b>21</b>		<b>23</b>

# Finding more and less flashcard

**FILL IN THE CHART**

<b>28</b>		

**FILL IN THE CHART**

<b>18</b>		<b>20</b>
<b>28</b>	<b>29</b>	<b>30</b>
<b>38</b>		<b>40</b>

**FILL IN THE CHART**

<b>56</b>		

**FILL IN THE CHART**

<b>46</b>		<b>48</b>
<b>56</b>	<b>57</b>	<b>58</b>
<b>66</b>		<b>68</b>

**FILL IN THE CHART**

<b>17</b>		

**FILL IN THE CHART**

<b>7</b>		<b>9</b>
<b>17</b>	<b>18</b>	<b>19</b>
<b>27</b>		<b>29</b>

# Finding more and less flashcard

**FILL IN THE CHART**

<b>63</b>		

**FILL IN THE CHART**

<b>53</b>		<b>55</b>
<b>63</b>	<b>64</b>	<b>65</b>
<b>73</b>		<b>75</b>

**FILL IN THE CHART**

<b>48</b>		

**FILL IN THE CHART**

<b>38</b>		<b>40</b>
<b>48</b>	<b>49</b>	<b>50</b>
<b>58</b>		<b>60</b>

**FILL IN THE CHART**

<b>44</b>		

**FILL IN THE CHART**

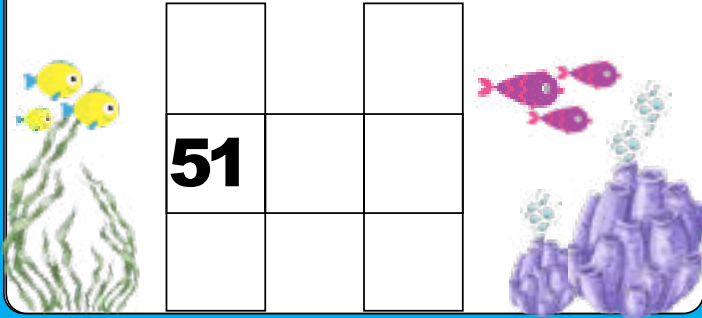
<b>34</b>		<b>36</b>
<b>44</b>	<b>45</b>	<b>46</b>
<b>54</b>		<b>56</b>



# Finding more and less flashcard

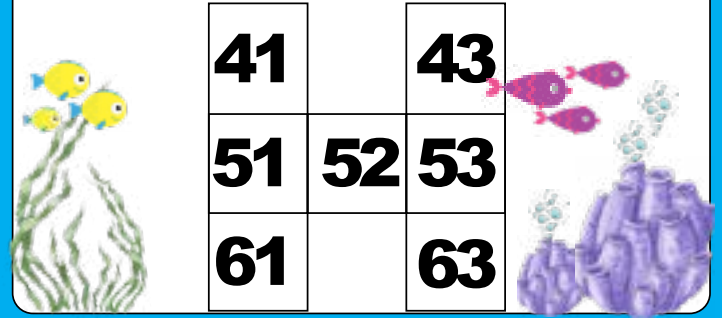
**FILL IN THE CHART**

<b>51</b>		




**FILL IN THE CHART**

<b>41</b>		<b>43</b>
<b>51</b>	<b>52</b>	<b>53</b>
<b>61</b>		<b>63</b>



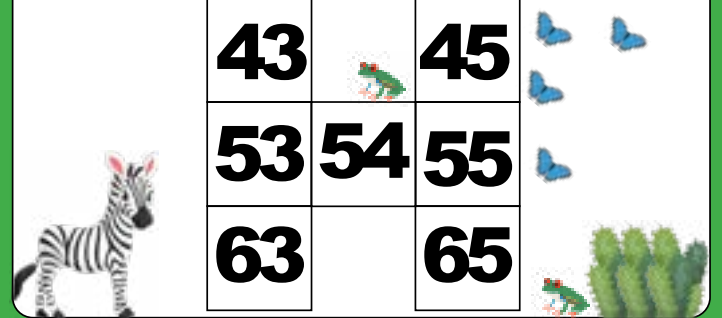
**FILL IN THE CHART**

<b>53</b>		




**FILL IN THE CHART**

<b>43</b>		<b>45</b>
<b>53</b>	<b>54</b>	<b>55</b>
<b>63</b>		<b>65</b>



**FILL IN THE CHART**

<b>87</b>		



**FILL IN THE CHART**

<b>77</b>		<b>79</b>
<b>87</b>	<b>88</b>	<b>89</b>
<b>97</b>		<b>99</b>

