

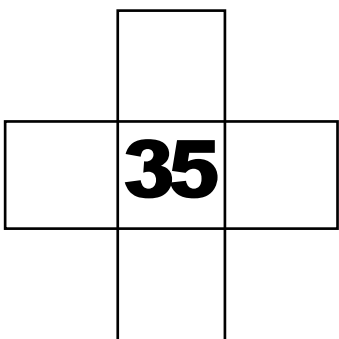


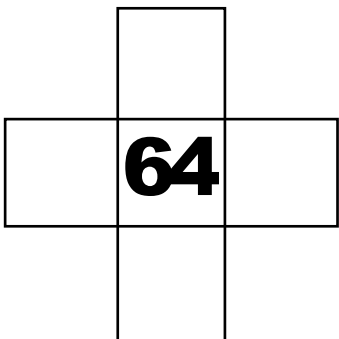
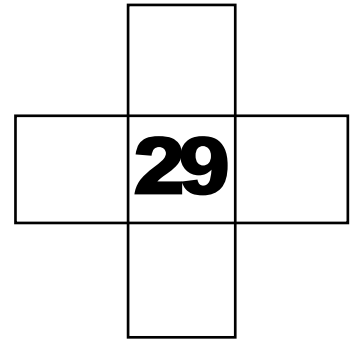
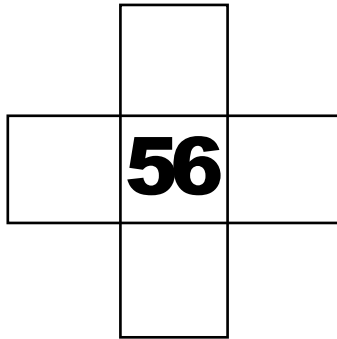
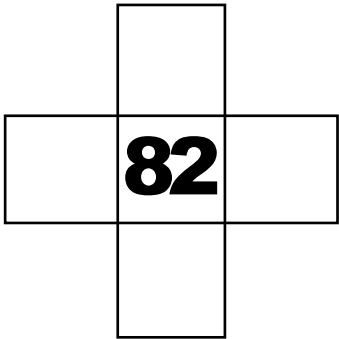

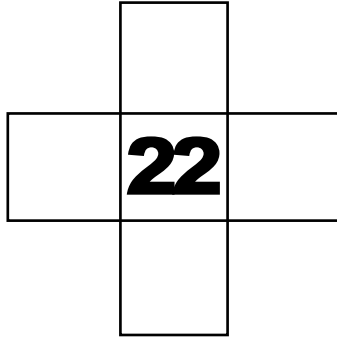
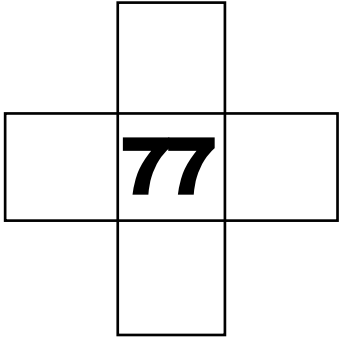


# HUNDRED GRID PUZZLES

Finding more and less



# HUNDRED GRID PUZZLES

Finding more and less

**13**

**19**

**72**

**15**

**64**

**89**

**42**

**23**

**79**

**82**

**75**

**23**

# HUNDRED GRID PUZZLES

Finding more and less

**44**

**32**

**28**

**45**

**55**

**38**

**79**

**68**

**82**

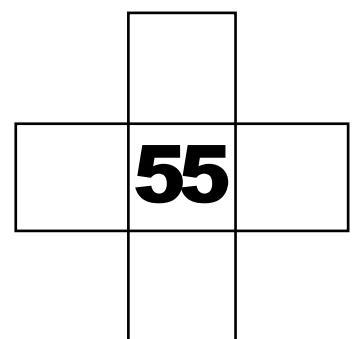

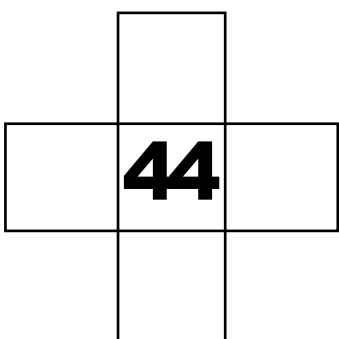


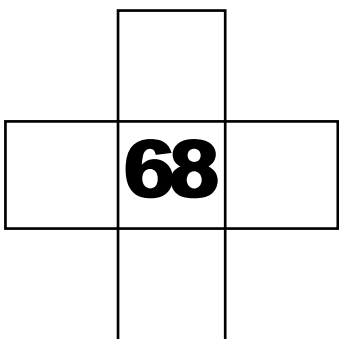
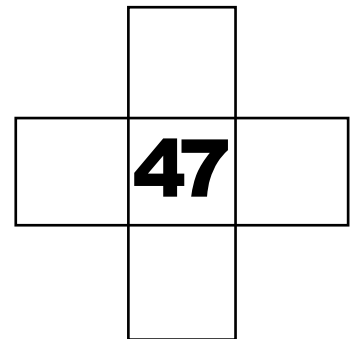

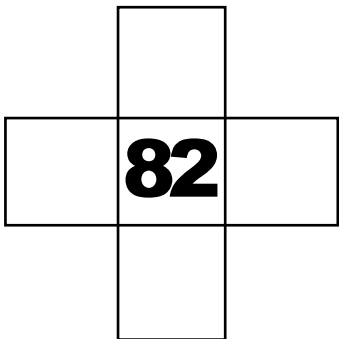
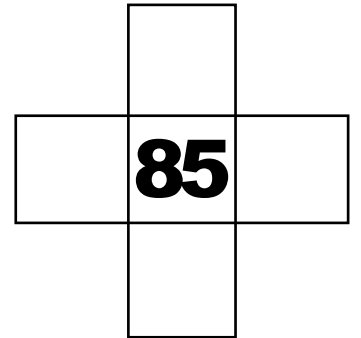
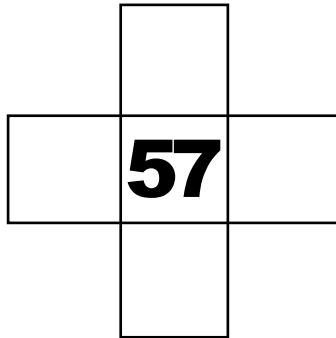

**25**

**38**

**14**

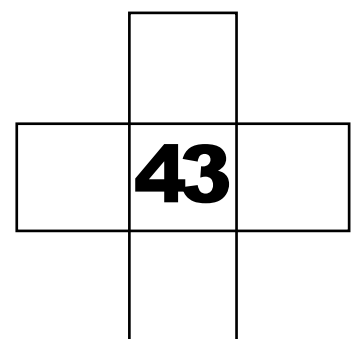

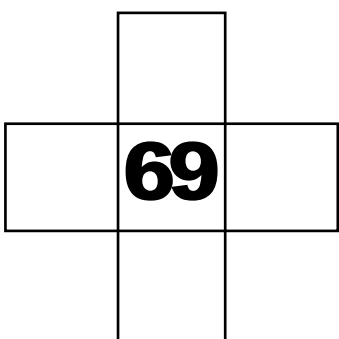
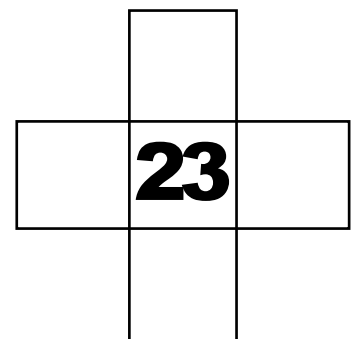
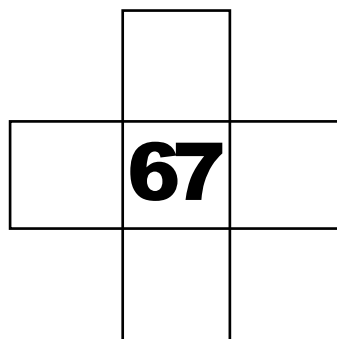



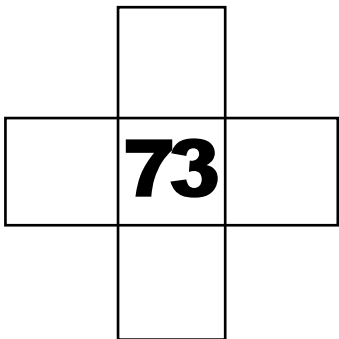
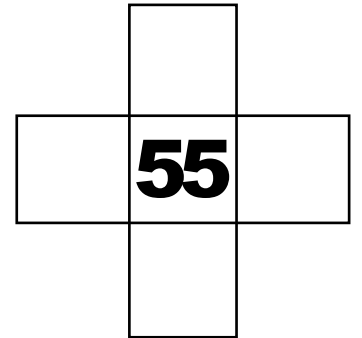
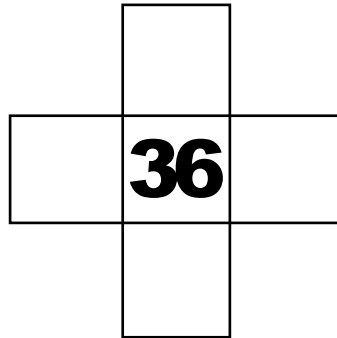
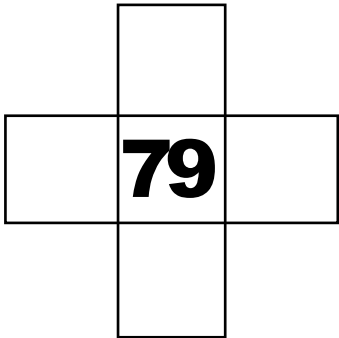
# HUNDRED GRID PUZZLES

Finding more and less



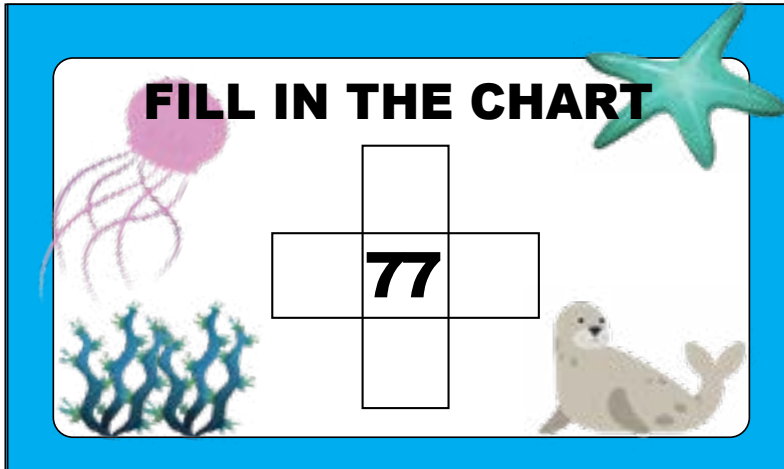
# HUNDRED GRID PUZZLES

Finding more and less




# Finding more and less flashcard

**FILL IN THE CHART**




	77	

**FILL IN THE CHART**




	67	
76	77	78
	87	

**FILL IN THE CHART**



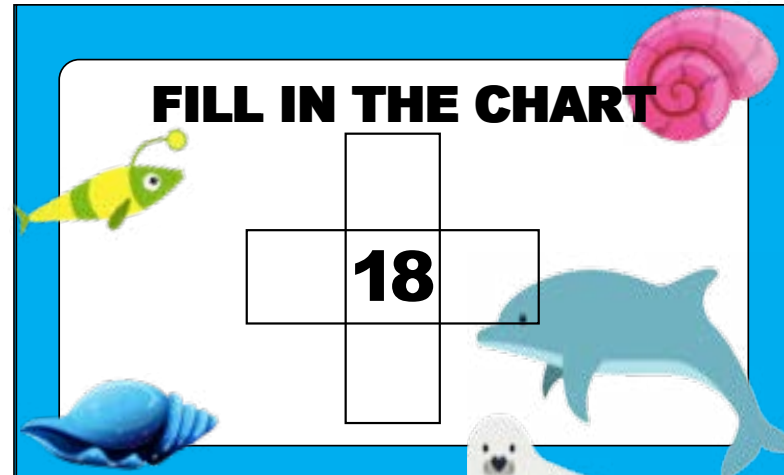
	22	

**FILL IN THE CHART**



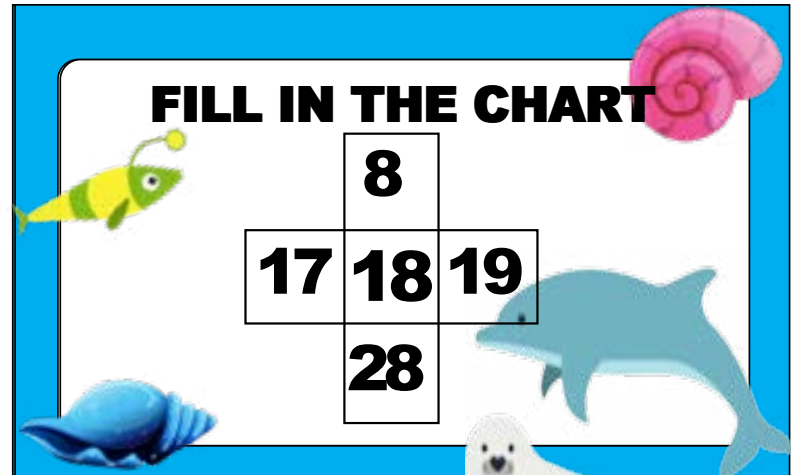
	12	
21	22	23
	32	

**FILL IN THE CHART**



	18	

**FILL IN THE CHART**



	8	
17	18	19
	28	

# Finding more and less flashcard

**FILL IN THE CHART**

	<b>82</b>	

**FILL IN THE CHART**

	<b>72</b>	
<b>81</b>	<b>82</b>	<b>83</b>
	<b>92</b>	

**FILL IN THE CHART**

	<b>56</b>	

**FILL IN THE CHART**

	<b>46</b>	
<b>55</b>	<b>56</b>	<b>57</b>
	<b>66</b>	

**FILL IN THE CHART**


	<b>29</b>	

**FILL IN THE CHART**

	<b>19</b>	
<b>28</b>	<b>29</b>	<b>30</b>
	<b>39</b>	

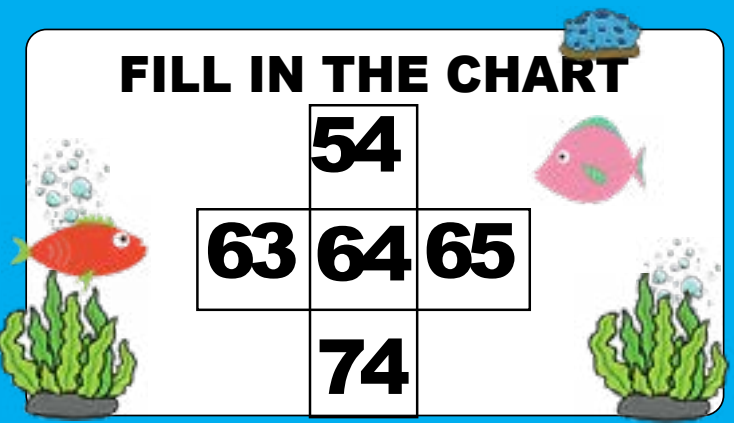
# Finding more and less flashcard

**FILL IN THE CHART**




	<b>64</b>	

**FILL IN THE CHART**



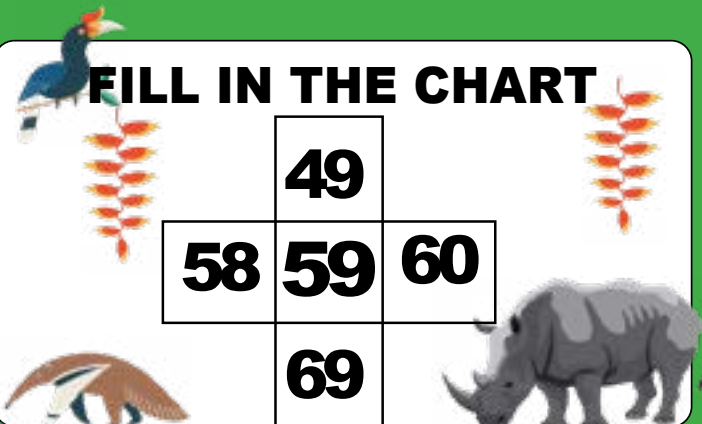
	<b>54</b>	
<b>63</b>	<b>64</b>	<b>65</b>
	<b>74</b>	

**FILL IN THE CHART**



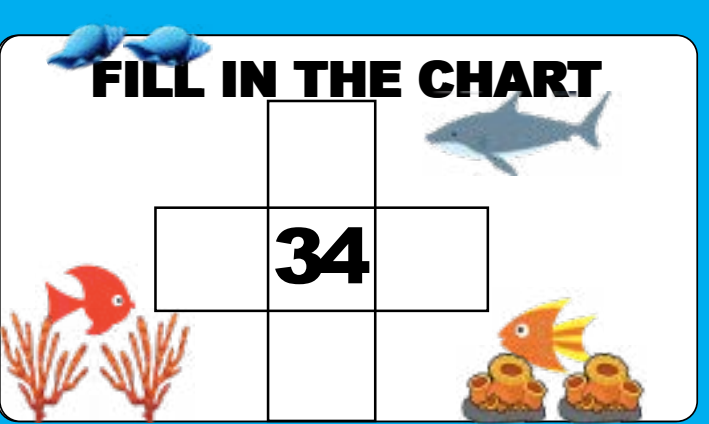
	<b>59</b>	

**FILL IN THE CHART**



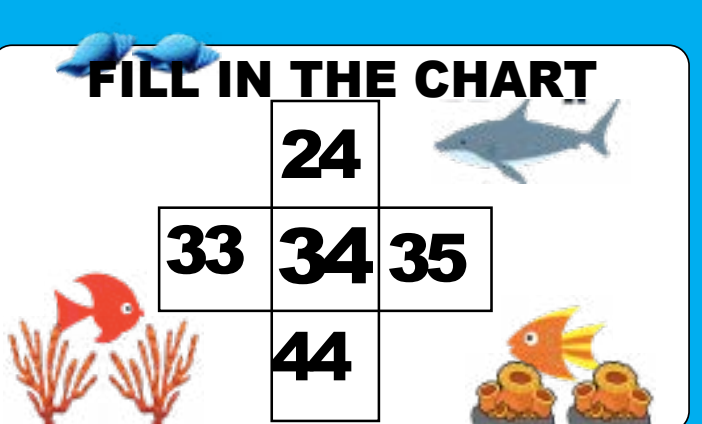
	<b>49</b>	
<b>58</b>	<b>59</b>	<b>60</b>
	<b>69</b>	

**FILL IN THE CHART**



	<b>34</b>	

**FILL IN THE CHART**



	<b>24</b>	
<b>33</b>	<b>34</b>	<b>35</b>
	<b>44</b>	



# Finding more and less flashcard

**FILL IN THE CHART**

	35	

**FILL IN THE CHART**

	25	
34	35	36
	45	

**FILL IN THE CHART**

	49	

**FILL IN THE CHART**

	39	
48	49	50
	59	

**FILL IN THE CHART**

	23	

**FILL IN THE CHART**

	13	
22	23	24
	33	

# Finding more and less flashcard

**FILL IN THE CHART**

	<b>13</b>	

**FILL IN THE CHART**

	<b>3</b>	
<b>12</b>	<b>13</b>	<b>14</b>
	<b>23</b>	

**FILL IN THE CHART**

	<b>19</b>	

**FILL IN THE CHART**

	<b>9</b>	
<b>18</b>	<b>19</b>	<b>20</b>
	<b>29</b>	

**FILL IN THE CHART**


	<b>72</b>	

**FILL IN THE CHART**


	<b>62</b>	
<b>71</b>	<b>72</b>	<b>73</b>
	<b>82</b>	

# Finding more and less flashcard


**FILL IN THE CHART**



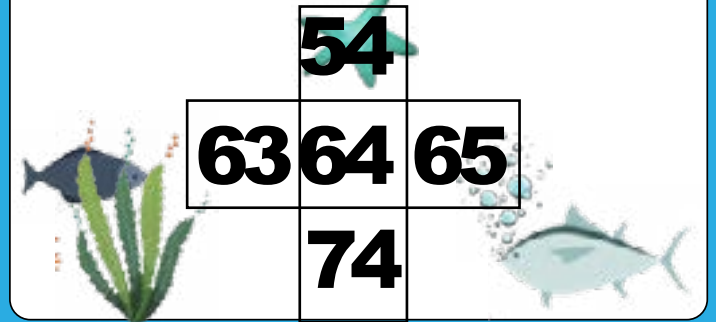
**FILL IN THE CHART**




**FILL IN THE CHART**



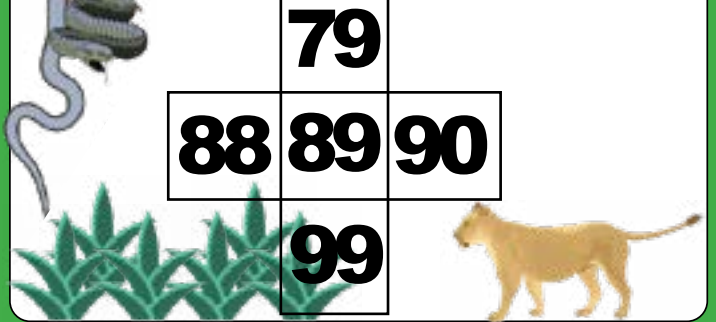
**FILL IN THE CHART**



**FILL IN THE CHART**



**FILL IN THE CHART**



# Finding more and less flashcard

**FILL IN THE CHART**

	42	

**FILL IN THE CHART**

	32	
41	42	43
	52	

**FILL IN THE CHART**

	23	

**FILL IN THE CHART**

	13	
22	23	24
	33	

**FILL IN THE CHART**

	79	

**FILL IN THE CHART**

	69	
78	79	80
	89	

# Finding more and less flashcard

**FILL IN THE CHART**

	<b>82</b>	

**FILL IN THE CHART**

	<b>72</b>	
<b>81</b>	<b>82</b>	<b>83</b>
	<b>92</b>	

**FILL IN THE CHART**

	<b>75</b>	

**FILL IN THE CHART**

	<b>65</b>	
<b>74</b>	<b>75</b>	<b>76</b>
	<b>85</b>	

**FILL IN THE CHART**

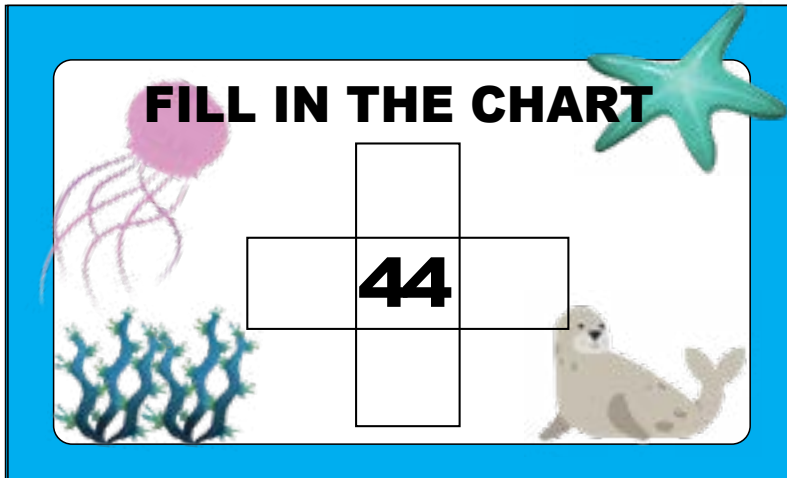
	<b>23</b>	

**FILL IN THE CHART**

	<b>13</b>	
<b>22</b>	<b>23</b>	<b>24</b>
	<b>33</b>	

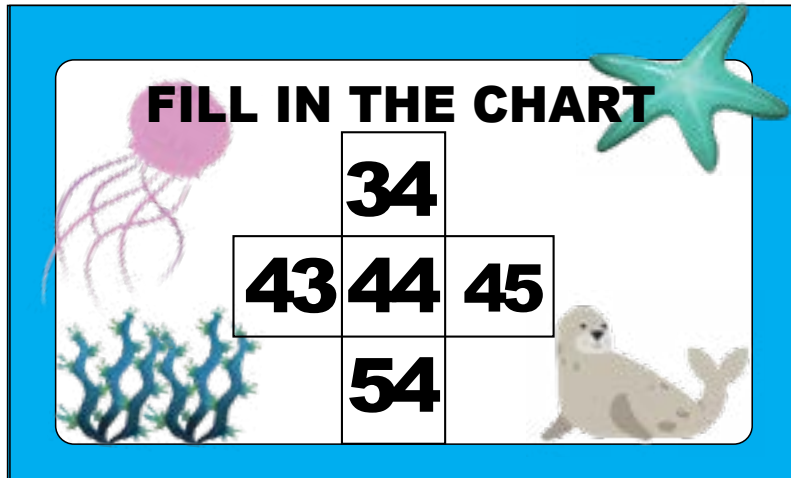
# Finding more and less flashcard

**FILL IN THE CHART**



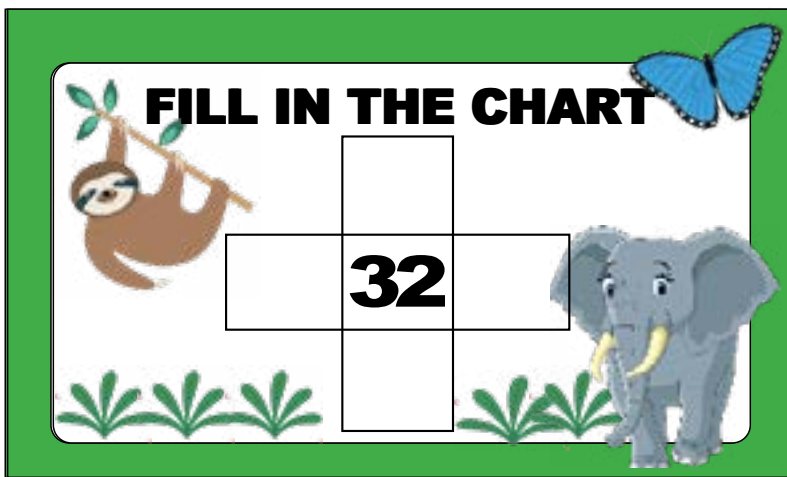
	<b>44</b>	

**FILL IN THE CHART**




	<b>34</b>	
<b>43</b>	<b>44</b>	<b>45</b>
	<b>54</b>	

**FILL IN THE CHART**



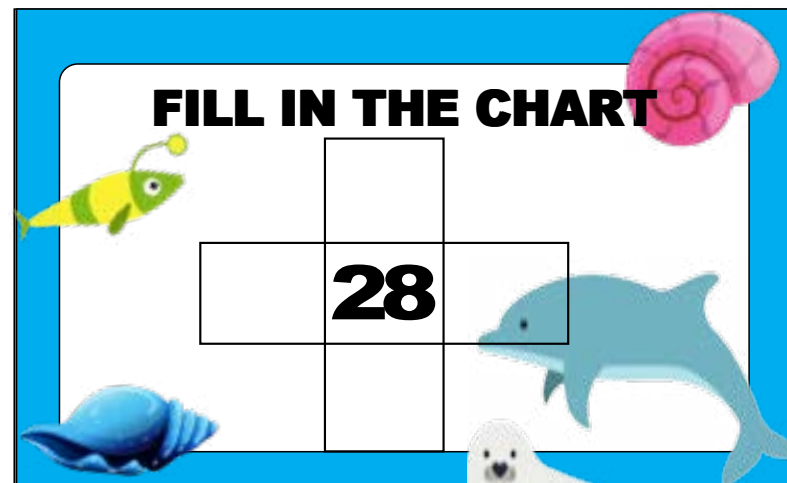
	<b>32</b>	

**FILL IN THE CHART**



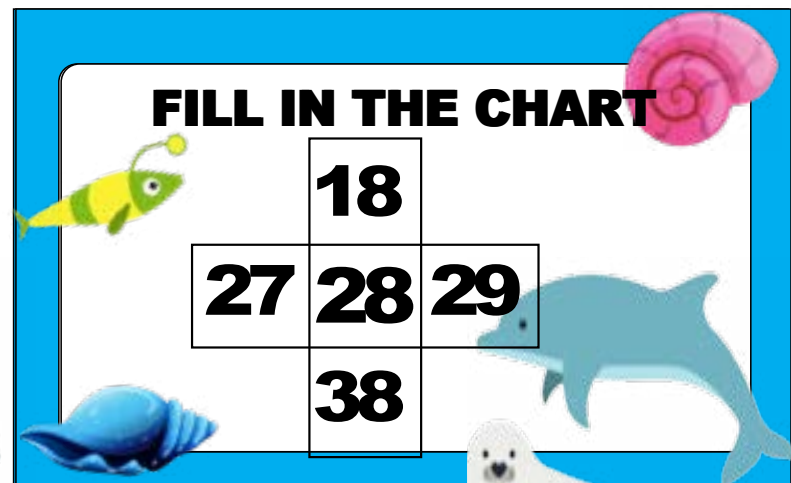
	<b>22</b>	
<b>31</b>	<b>32</b>	<b>33</b>
	<b>42</b>	

**FILL IN THE CHART**



	<b>28</b>	

**FILL IN THE CHART**



	<b>18</b>	
<b>27</b>	<b>28</b>	<b>29</b>
	<b>38</b>	

# Finding more and less flashcard

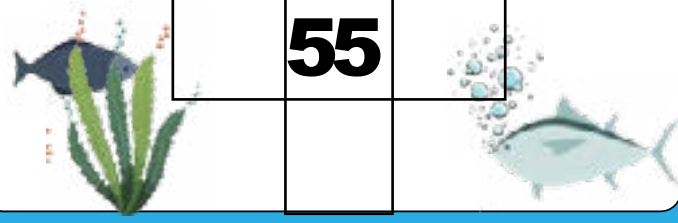
FILL IN THE CHART



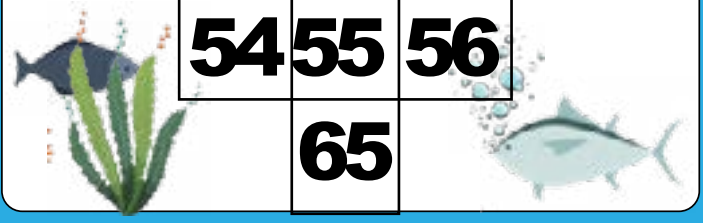
FILL IN THE CHART



FILL IN THE CHART



FILL IN THE CHART



FILL IN THE CHART



FILL IN THE CHART



# Finding more and less flashcard

**FILL IN THE CHART**

	79	

**FILL IN THE CHART**

	69	
78	79	80
	89	

**FILL IN THE CHART**

	68	

**FILL IN THE CHART**

	58	
67	68	69
	78	

**FILL IN THE CHART**

	82	

**FILL IN THE CHART**

	72	
81	82	83
	92	



# Finding more and less flashcard

**FILL IN THE CHART**

	25	

**FILL IN THE CHART**

	15	
24	25	26
	35	

**FILL IN THE CHART**

	38	

**FILL IN THE CHART**

	28	
37	38	39
	48	

**FILL IN THE CHART**

	14	

**FILL IN THE CHART**

	4	
13	14	15
	24	

# Finding more and less flashcard

**FILL IN THE CHART**

	13	

**FILL IN THE CHART**

	3	
12	13	14
	23	

**FILL IN THE CHART**

	57	

**FILL IN THE CHART**

	47	
56	57	58
	67	

**FILL IN THE CHART**

	85	

**FILL IN THE CHART**

	75	
84	85	86
	95	

# Finding more and less flashcard

**FILL IN THE CHART**

	<b>82</b>	

**FILL IN THE CHART**

		<b>72</b>
<b>81</b>	<b>82</b>	<b>83</b>
	<b>92</b>	

**FILL IN THE CHART**

	<b>32</b>	

**FILL IN THE CHART**

		<b>22</b>
<b>31</b>	<b>32</b>	<b>33</b>
	<b>42</b>	

**FILL IN THE CHART**

	<b>47</b>	

**FILL IN THE CHART**

		<b>37</b>
<b>46</b>	<b>47</b>	<b>48</b>
	<b>57</b>	

# Finding more and less flashcard

**FILL IN THE CHART**

	68	

**FILL IN THE CHART**

	58	
67	68	69
	78	

**FILL IN THE CHART**

	35	

**FILL IN THE CHART**

	25	
34	35	36
	45	

**FILL IN THE CHART**

	19	

**FILL IN THE CHART**

	9	
18	19	20
	29	

# Finding more and less flashcard

**FILL IN THE CHART**

	<b>44</b>	

**FILL IN THE CHART**

	<b>34</b>	
<b>43</b>	<b>44</b>	<b>45</b>
	<b>54</b>	

**FILL IN THE CHART**

	<b>22</b>	

**FILL IN THE CHART**

	<b>12</b>	
<b>21</b>	<b>22</b>	<b>23</b>
	<b>32</b>	

**FILL IN THE CHART**

	<b>55</b>	

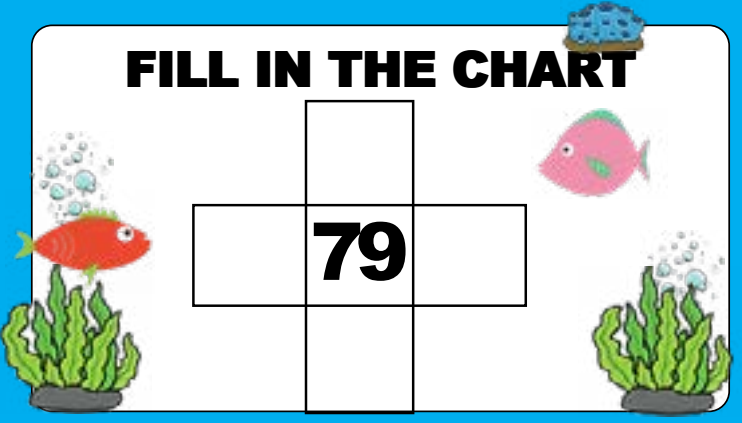
**FILL IN THE CHART**

	<b>45</b>	
<b>54</b>	<b>55</b>	<b>56</b>
	<b>65</b>	

# Finding more and less flashcard

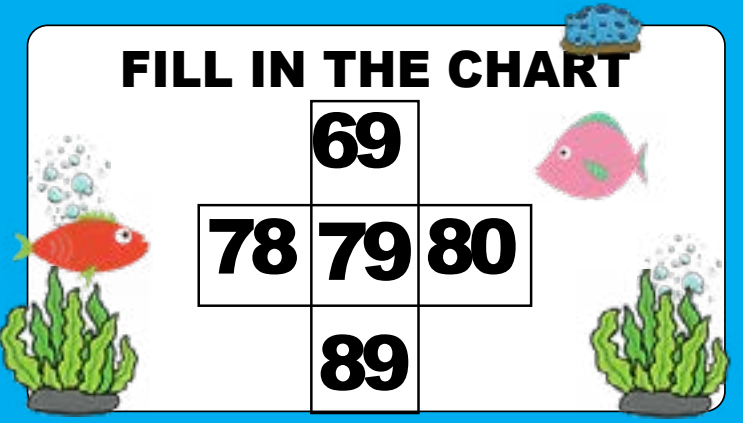
**FILL IN THE CHART**

	<b>79</b>	




**FILL IN THE CHART**

	<b>69</b>	
<b>78</b>	<b>79</b>	<b>80</b>
	<b>89</b>	




**FILL IN THE CHART**

	<b>36</b>	




**FILL IN THE CHART**

	<b>26</b>	
<b>35</b>	<b>36</b>	<b>37</b>
	<b>46</b>	



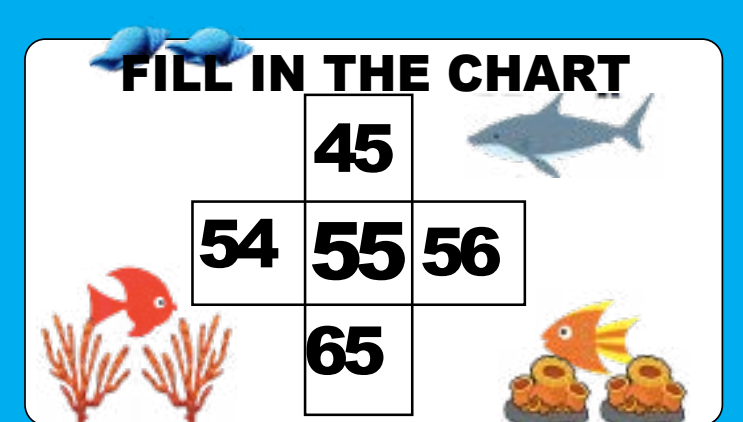
**FILL IN THE CHART**

	<b>55</b>	



**FILL IN THE CHART**

	<b>45</b>	
<b>54</b>	<b>55</b>	<b>56</b>
	<b>65</b>	



# Finding more and less flashcard

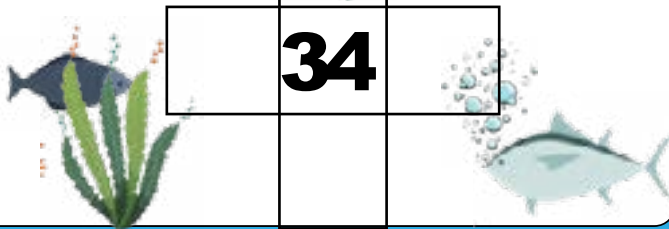
FILL IN THE CHART



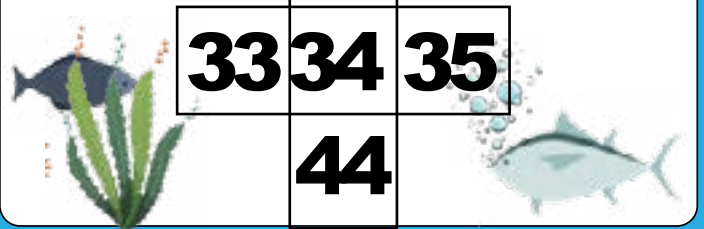
FILL IN THE CHART



FILL IN THE CHART



FILL IN THE CHART



FILL IN THE CHART



FILL IN THE CHART



# Finding more and less flashcard

**FILL IN THE CHART**

	<b>52</b>	

**FILL IN THE CHART**

	<b>42</b>	
<b>51</b>	<b>52</b>	<b>53</b>
	<b>62</b>	

**FILL IN THE CHART**

	<b>67</b>	

**FILL IN THE CHART**

	<b>57</b>	
<b>66</b>	<b>67</b>	<b>68</b>
	<b>77</b>	

**FILL IN THE CHART**

	<b>23</b>	


**FILL IN THE CHART**

	<b>13</b>	
<b>22</b>	<b>23</b>	<b>24</b>
	<b>33</b>	




# Finding more and less flashcard

**FILL IN THE CHART**




	69	

**FILL IN THE CHART**



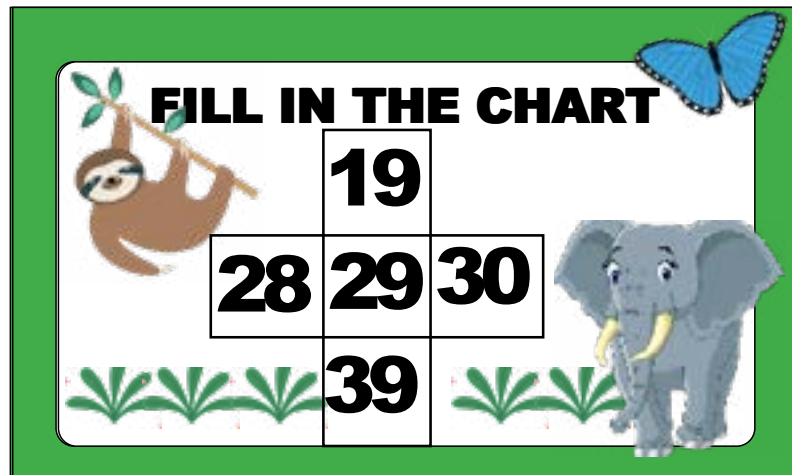
	59	
68	69	70
	79	

**FILL IN THE CHART**




	29	

**FILL IN THE CHART**




	19	
28	29	30
	39	

**FILL IN THE CHART**



	43	

**FILL IN THE CHART**



	33	
42	43	44
	53	